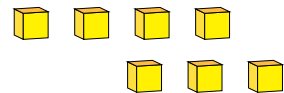
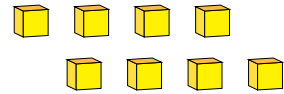
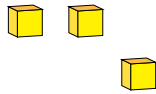
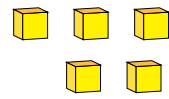
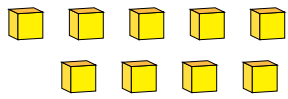


Representing Numbers (H)

What number is shown in each group of base ten blocks?



1

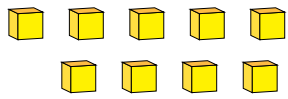


Representing Numbers (H) Answers

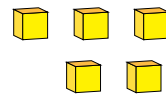
What number is shown in each group of base ten blocks?



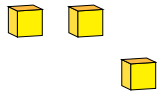
1



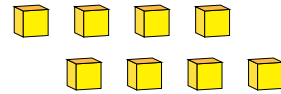
9



5



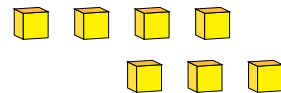
3



8



1



7