

Representing Numbers (G)

What number is shown in each group of base ten blocks?



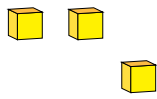
1

Representing Numbers (G) Answers

What number is shown in each group of base ten blocks?



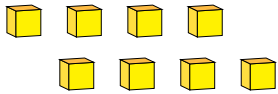
1



3



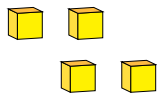
2



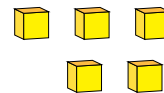
8



1



4



5