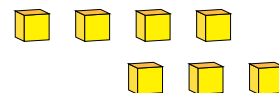
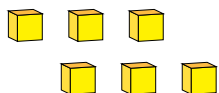
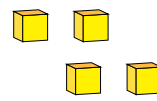
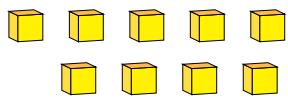


Representing Numbers (F)

What number is shown in each group of base ten blocks?



1

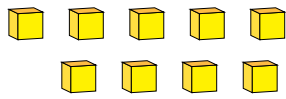


Representing Numbers (F) Answers

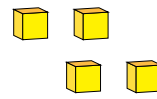
What number is shown in each group of base ten blocks?



1



9



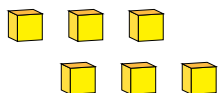
4



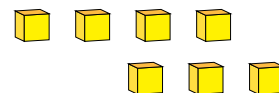
2



1



6



7