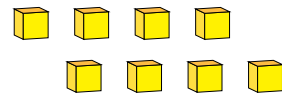
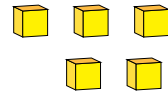
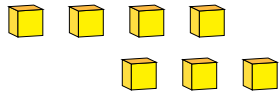
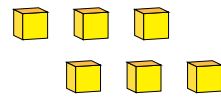
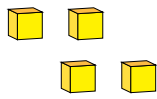


Representing Numbers (E)

What number is shown in each group of base ten blocks?



1

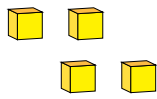


Representing Numbers (E) Answers

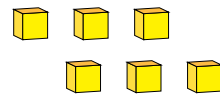
What number is shown in each group of base ten blocks?



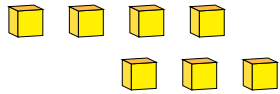
1



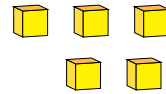
4



6



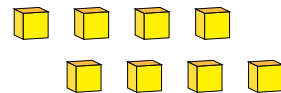
7



5



1



8