

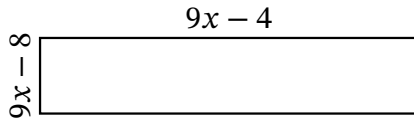
Algebra Rectangles (J)

Name: _____

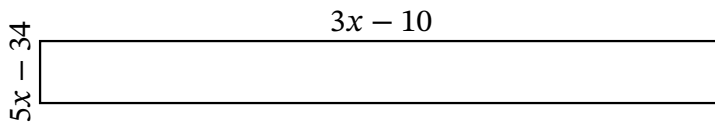
Date: _____

Score: _____

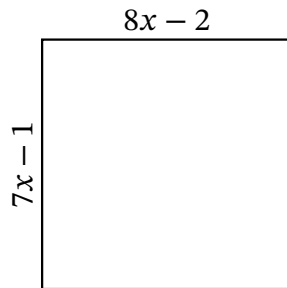
Determine the Value of x , Length, Width and Area for each rectangle.



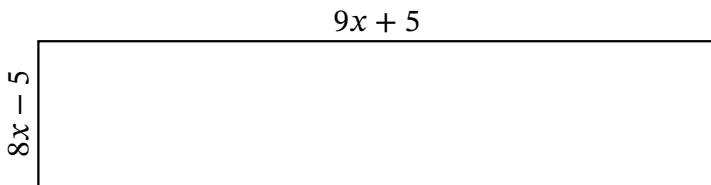
Perimeter: mi
Value of x : mi
Length: mi
Width: mi
Area: mi^2



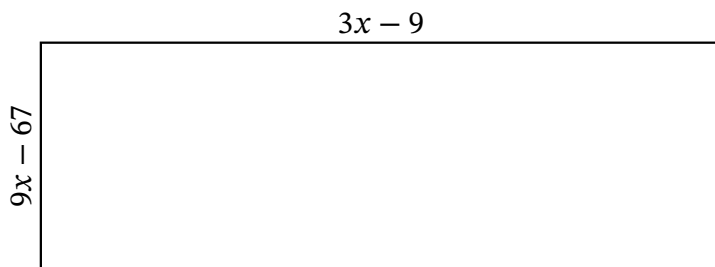
Perimeter: cm
Value of x : cm
Length: cm
Width: cm
Area: cm^2



Perimeter: μm
Value of x : μm
Length: μm
Width: μm
Area: μm^2



Perimeter: mm
Value of x : mm
Length: mm
Width: mm
Area: mm^2



Perimeter: in
Value of x : in
Length: in
Width: in
Area: in^2