

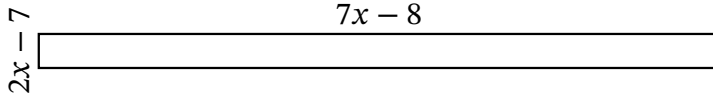
Algebra Rectangles (I)

Name: _____

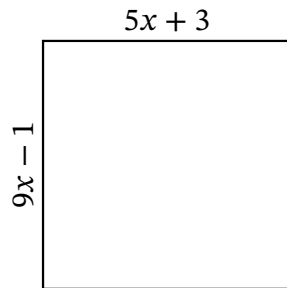
Date: _____

Score: _____

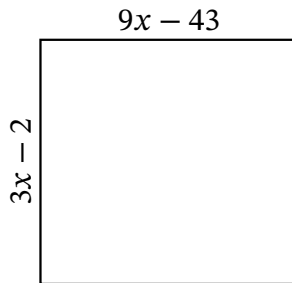
Determine the Value of x , Length, Width and Area for each rectangle.



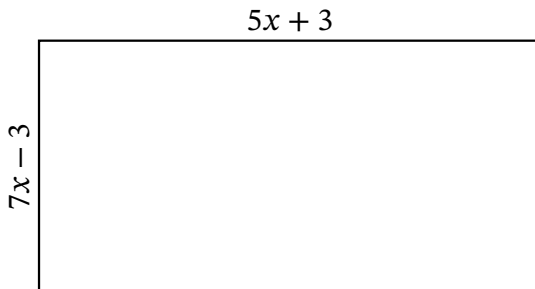
Perimeter: in
 Value of x : in
 Length: in
 Width: in
 Area: in²



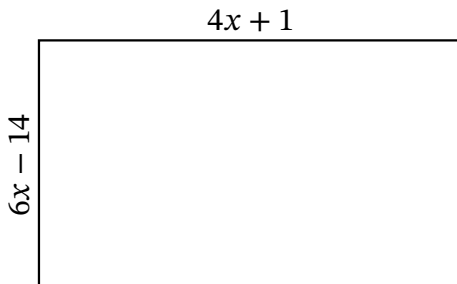
Perimeter: ft
 Value of x : ft
 Length: ft
 Width: ft
 Area: ft²



Perimeter: yd
 Value of x : yd
 Length: yd
 Width: yd
 Area: yd²



Perimeter: mi
 Value of x : mi
 Length: mi
 Width: mi
 Area: mi²



Perimeter: nm
 Value of x : nm
 Length: nm
 Width: nm
 Area: nm²