

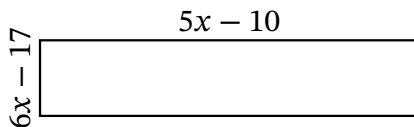
Algebra Rectangles (H)

Name: _____

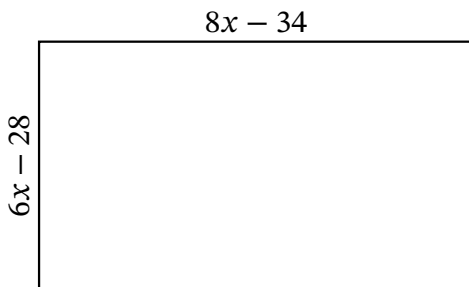
Date: _____

Score: _____

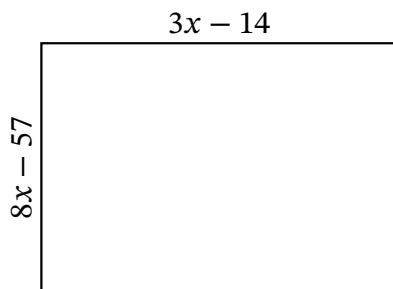
Determine the Value of x , Length, Width and Area for each rectangle.



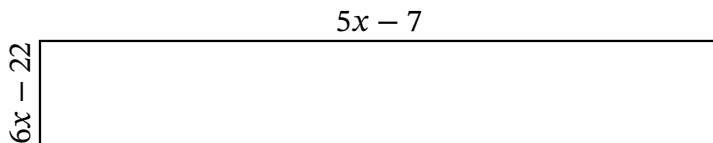
Perimeter: ft
Value of x : ft
Length: ft
Width: ft
Area: ft^2



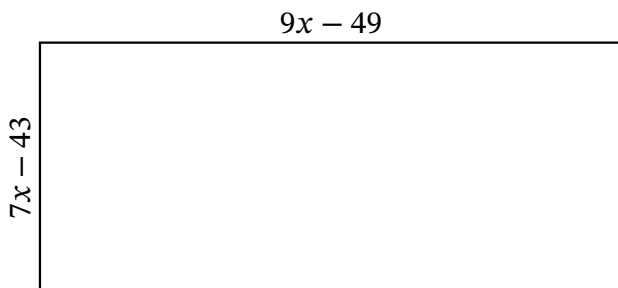
Perimeter: km
Value of x : km
Length: km
Width: km
Area: km^2



Perimeter: in
Value of x : in
Length: in
Width: in
Area: in^2



Perimeter: nm
Value of x : nm
Length: nm
Width: nm
Area: nm^2



Perimeter: mm
Value of x : mm
Length: mm
Width: mm
Area: mm^2

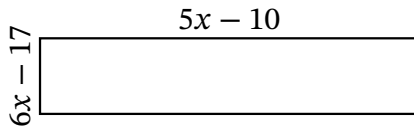
Algebra Rectangles (H) Answers

Name: _____

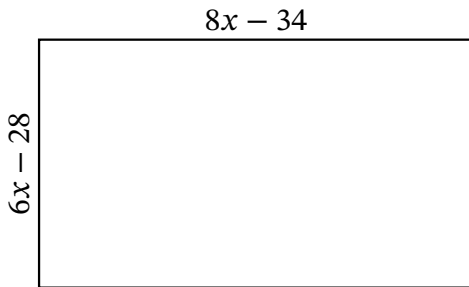
Date: _____

Score: _____

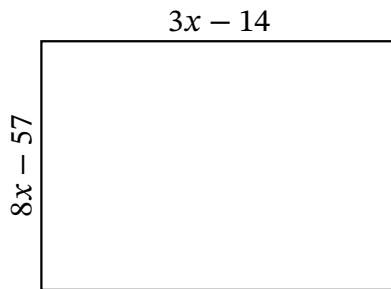
Determine the Value of x , Length, Width and Area for each rectangle.



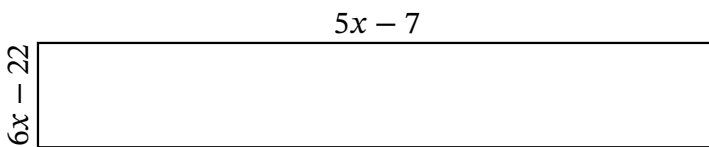
Perimeter: ft
Value of x : ft
Length: ft
Width: ft
Area: ft^2



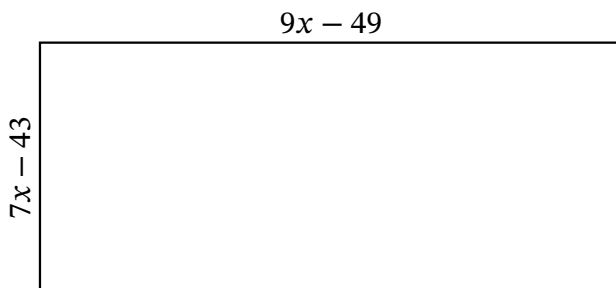
Perimeter: km
Value of x : km
Length: km
Width: km
Area: km^2



Perimeter: in
Value of x : in
Length: in
Width: in
Area: in^2



Perimeter: nm
Value of x : nm
Length: nm
Width: nm
Area: nm^2



Perimeter: mm
Value of x : mm
Length: mm
Width: mm
Area: mm^2