

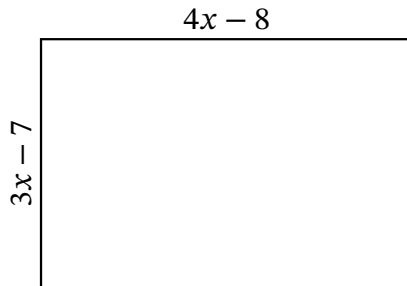
# Algebra Rectangles (E)

Name: \_\_\_\_\_

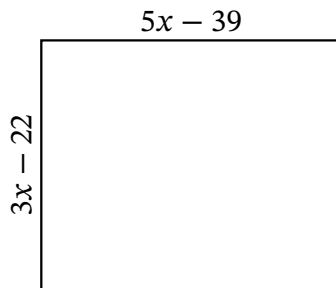
Date: \_\_\_\_\_

Score: \_\_\_\_\_

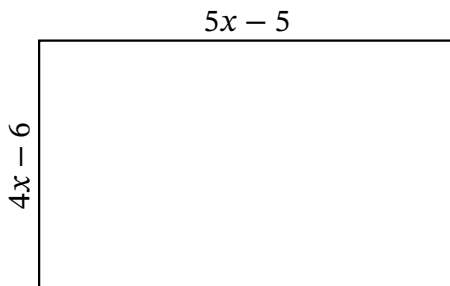
Determine the Value of  $x$ , Length, Width and Area for each rectangle.



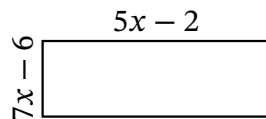
Perimeter:           cm  
Value of  $x$ :        cm  
Length:             cm  
Width:              cm  
Area:                cm<sup>2</sup>



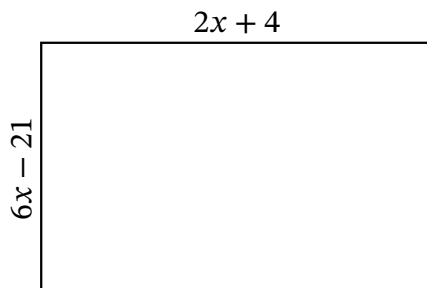
Perimeter:           mi  
Value of  $x$ :        mi  
Length:             mi  
Width:              mi  
Area:                mi<sup>2</sup>



Perimeter:           ft  
Value of  $x$ :        ft  
Length:             ft  
Width:              ft  
Area:                ft<sup>2</sup>



Perimeter:           in  
Value of  $x$ :        in  
Length:             in  
Width:              in  
Area:                in<sup>2</sup>



Perimeter:           yd  
Value of  $x$ :        yd  
Length:             yd  
Width:              yd  
Area:                yd<sup>2</sup>