

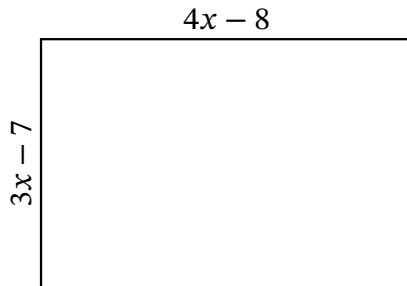
Algebra Rectangles (E)

Name: _____

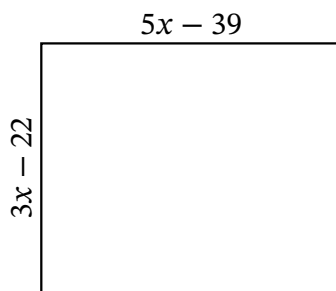
Date: _____

Score: _____

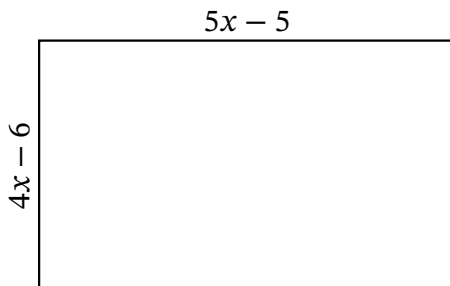
Determine the Value of x , Length, Width and Area for each rectangle.



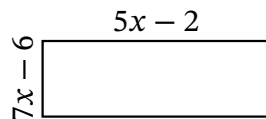
Perimeter: cm
Value of x : cm
Length: cm
Width: cm
Area: cm²



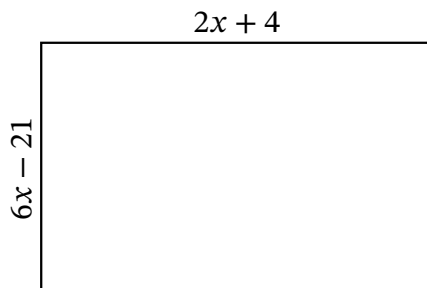
Perimeter: mi
Value of x : mi
Length: mi
Width: mi
Area: mi²



Perimeter: ft
Value of x : ft
Length: ft
Width: ft
Area: ft²



Perimeter: in
Value of x : in
Length: in
Width: in
Area: in²



Perimeter: yd
Value of x : yd
Length: yd
Width: yd
Area: yd²

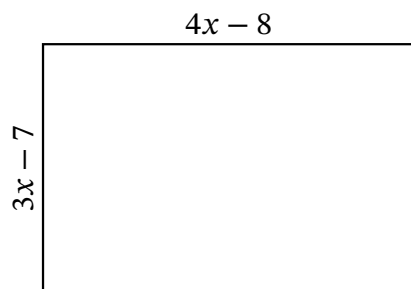
Algebra Rectangles (E) Answers

Name: _____

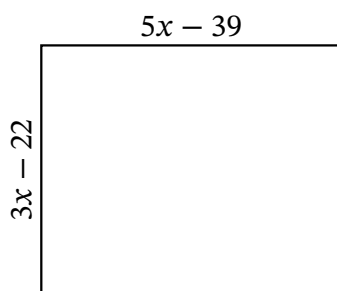
Date: _____

Score: _____

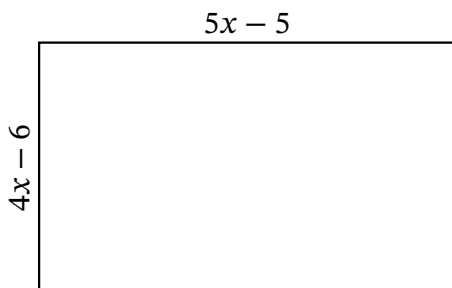
Determine the Value of x , Length, Width and Area for each rectangle.



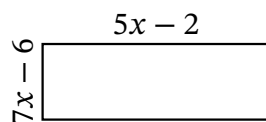
Perimeter: cm
Value of x : cm
Length: cm
Width: cm
Area: cm^2



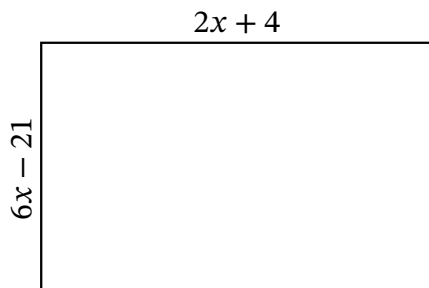
Perimeter: mi
Value of x : mi
Length: mi
Width: mi
Area: mi^2



Perimeter: ft
Value of x : ft
Length: ft
Width: ft
Area: ft^2



Perimeter: in
Value of x : in
Length: in
Width: in
Area: in^2



Perimeter: yd
Value of x : yd
Length: yd
Width: yd
Area: yd^2