

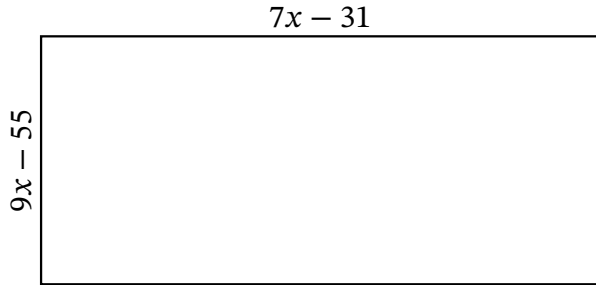
Algebra Rectangles (C)

Name: _____

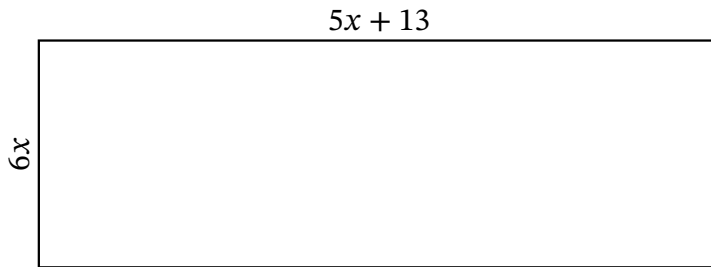
Date: _____

Score: _____

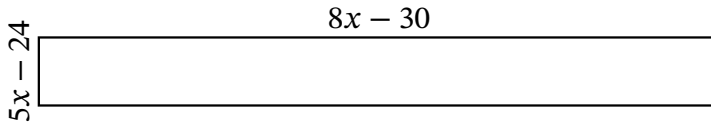
Determine the Value of x , Length, Width and Area for each rectangle.



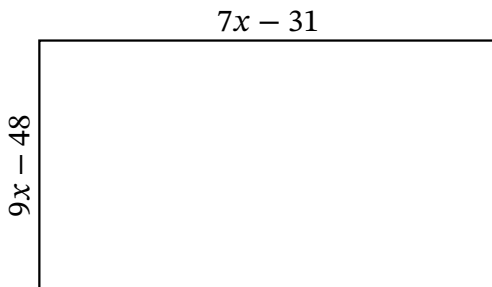
Perimeter: _____ mi
Value of x : _____ mi
Length: _____ mi
Width: _____ mi
Area: _____ mi^2



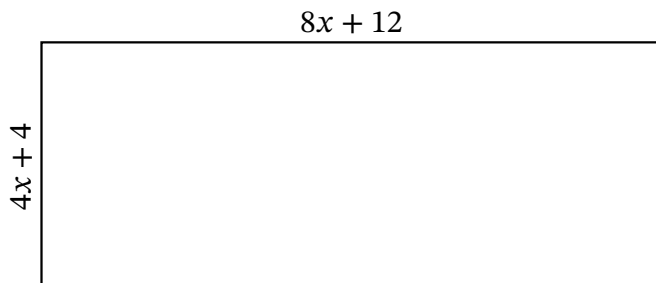
Perimeter: _____ μm
Value of x : _____ μm
Length: _____ μm
Width: _____ μm
Area: _____ μm^2



Perimeter: _____ m
Value of x : _____ m
Length: _____ m
Width: _____ m
Area: _____ m^2



Perimeter: _____ yd
Value of x : _____ yd
Length: _____ yd
Width: _____ yd
Area: _____ yd^2



Perimeter: _____ mm
Value of x : _____ mm
Length: _____ mm
Width: _____ mm
Area: _____ mm^2