

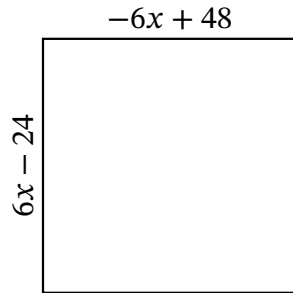
Algebra Rectangles (J)

Name: _____

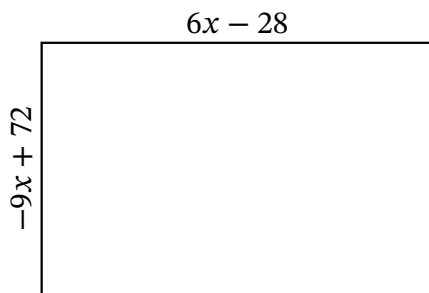
Date: _____

Score: _____

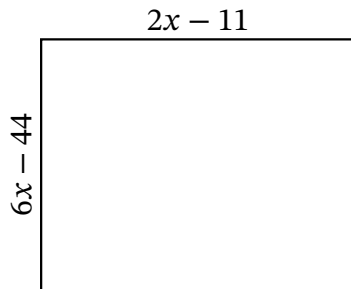
Determine the Value of x , Length, Width and Area for each rectangle.



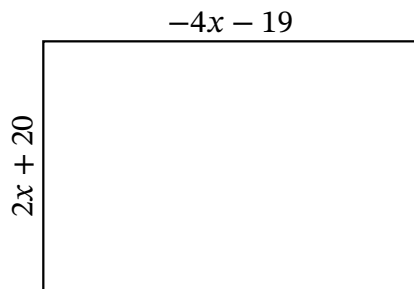
Perimeter: m
Value of x : m
Length: m
Width: m
Area: m^2



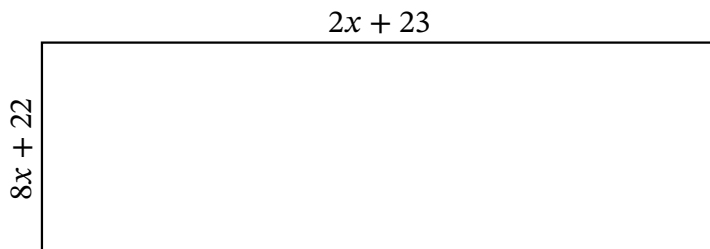
Perimeter: μm
Value of x : μm
Length: μm
Width: μm
Area: μm^2



Perimeter: mi
Value of x : mi
Length: mi
Width: mi
Area: mi^2



Perimeter: km
Value of x : km
Length: km
Width: km
Area: km^2



Perimeter: in
Value of x : in
Length: in
Width: in
Area: in^2