

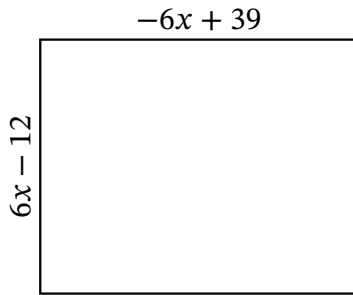
# Algebra Rectangles (I)

Name: \_\_\_\_\_

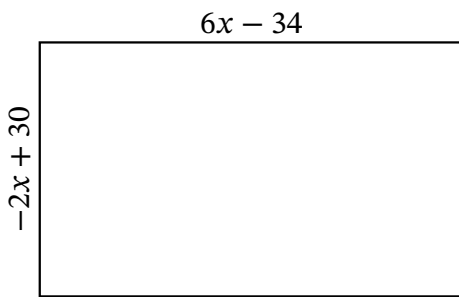
Date: \_\_\_\_\_

Score: \_\_\_\_\_

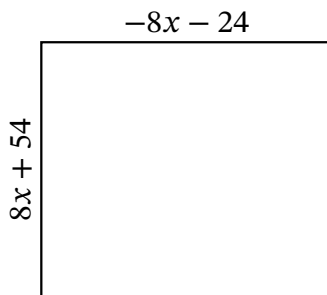
Determine the Value of  $x$ , Length, Width and Area for each rectangle.



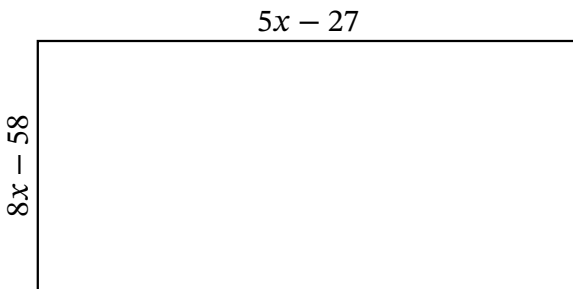
Perimeter:  $\mu\text{m}$   
 Value of  $x$ :  $\mu\text{m}$   
 Length:  $\mu\text{m}$   
 Width:  $\mu\text{m}$   
 Area:  $\mu\text{m}^2$



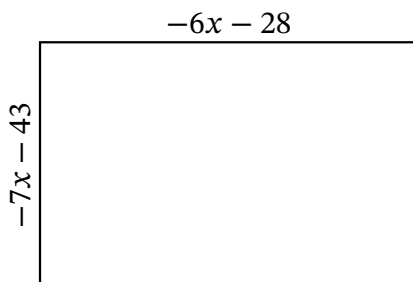
Perimeter:  $\text{yd}$   
 Value of  $x$ :  $\text{yd}$   
 Length:  $\text{yd}$   
 Width:  $\text{yd}$   
 Area:  $\text{yd}^2$



Perimeter:  $\text{nm}$   
 Value of  $x$ :  $\text{nm}$   
 Length:  $\text{nm}$   
 Width:  $\text{nm}$   
 Area:  $\text{nm}^2$



Perimeter:  $\text{mm}$   
 Value of  $x$ :  $\text{mm}$   
 Length:  $\text{mm}$   
 Width:  $\text{mm}$   
 Area:  $\text{mm}^2$



Perimeter:  $\text{cm}$   
 Value of  $x$ :  $\text{cm}$   
 Length:  $\text{cm}$   
 Width:  $\text{cm}$   
 Area:  $\text{cm}^2$

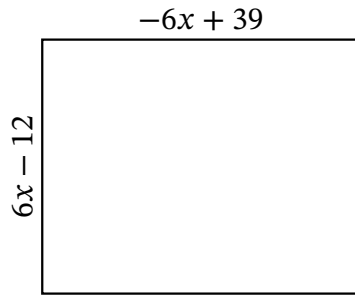
# Algebra Rectangles (I) Answers

Name: \_\_\_\_\_

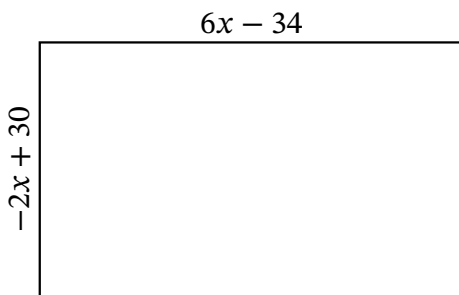
Date: \_\_\_\_\_

Score: \_\_\_\_\_

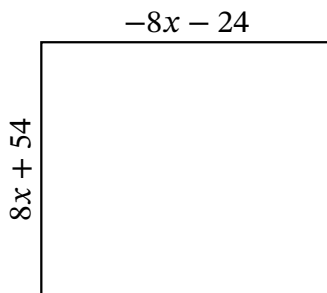
Determine the Value of  $x$ , Length, Width and Area for each rectangle.



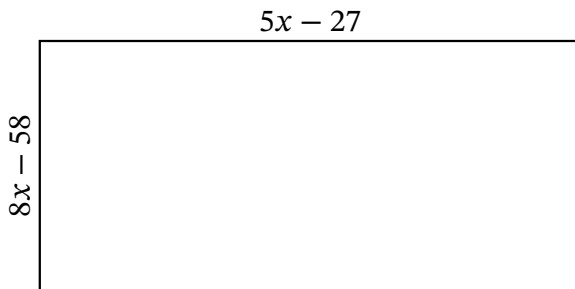
Perimeter:  $\mu\text{m}$   
 Value of  $x$ :  $\mu\text{m}$   
 Length:  $\mu\text{m}$   
 Width:  $\mu\text{m}$   
 Area:  $\mu\text{m}^2$



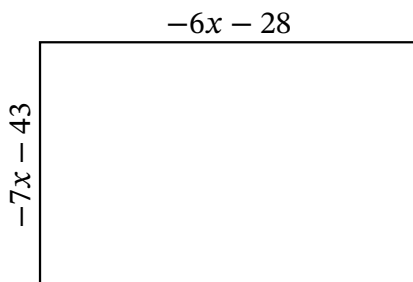
Perimeter:  $\text{yd}$   
 Value of  $x$ :  $\text{yd}$   
 Length:  $\text{yd}$   
 Width:  $\text{yd}$   
 Area:  $\text{yd}^2$



Perimeter:  $\text{nm}$   
 Value of  $x$ :  $\text{nm}$   
 Length:  $\text{nm}$   
 Width:  $\text{nm}$   
 Area:  $\text{nm}^2$



Perimeter:  $\text{mm}$   
 Value of  $x$ :  $\text{mm}$   
 Length:  $\text{mm}$   
 Width:  $\text{mm}$   
 Area:  $\text{mm}^2$



Perimeter:  $\text{cm}$   
 Value of  $x$ :  $\text{cm}$   
 Length:  $\text{cm}$   
 Width:  $\text{cm}$   
 Area:  $\text{cm}^2$