

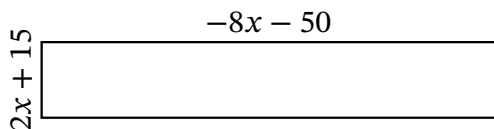
Algebra Rectangles (H)

Name: _____

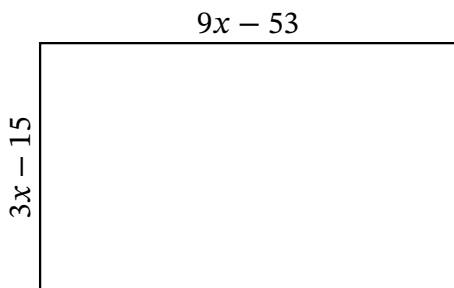
Date: _____

Score: _____

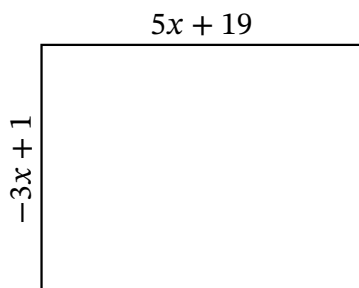
Determine the Value of x , Length, Width and Area for each rectangle.



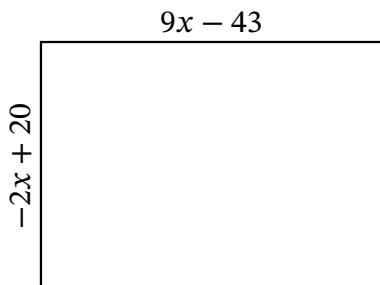
Perimeter: yd
 Value of x : yd
 Length: yd
 Width: yd
 Area: yd²



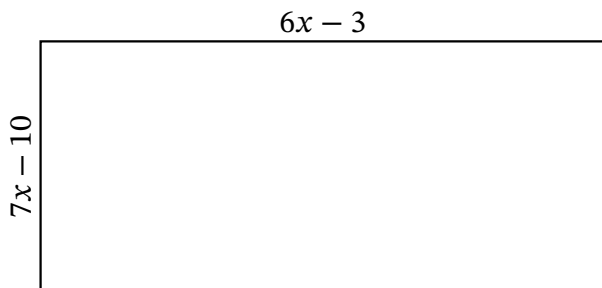
Perimeter: m
 Value of x : m
 Length: m
 Width: m
 Area: m²



Perimeter: nm
 Value of x : nm
 Length: nm
 Width: nm
 Area: nm²



Perimeter: mi
 Value of x : mi
 Length: mi
 Width: mi
 Area: mi²



Perimeter: cm
 Value of x : cm
 Length: cm
 Width: cm
 Area: cm²

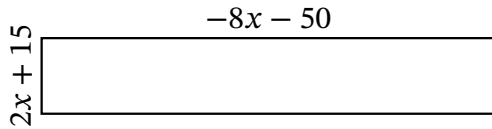
Algebra Rectangles (H) Answers

Name: _____

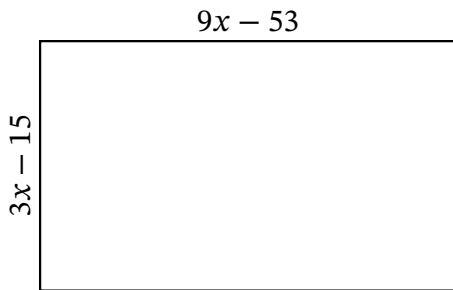
Date: _____

Score: _____

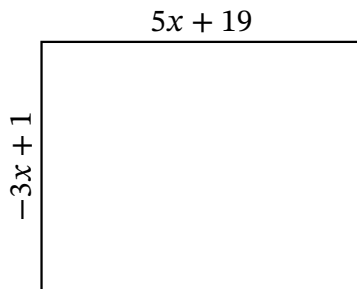
Determine the Value of x , Length, Width and Area for each rectangle.



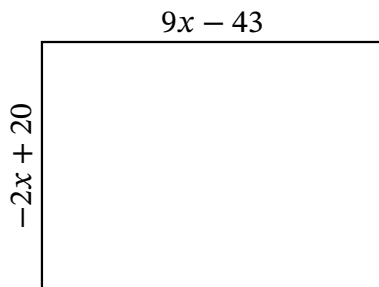
Perimeter: yd
 Value of x : yd
 Length: yd
 Width: yd
 Area: yd^2



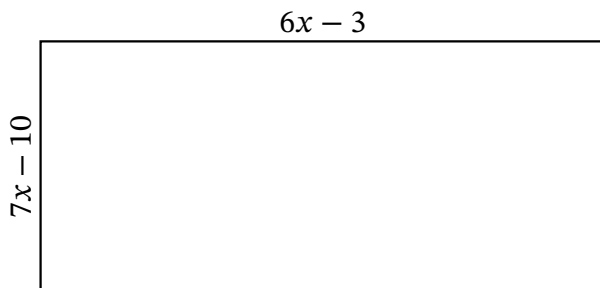
Perimeter: m
 Value of x : m
 Length: m
 Width: m
 Area: m^2



Perimeter: nm
 Value of x : nm
 Length: nm
 Width: nm
 Area: nm^2



Perimeter: mi
 Value of x : mi
 Length: mi
 Width: mi
 Area: mi^2



Perimeter: cm
 Value of x : cm
 Length: cm
 Width: cm
 Area: cm^2