

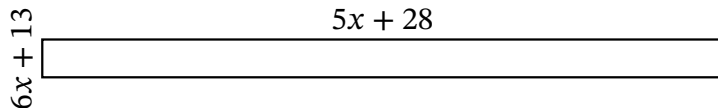
# Algebra Rectangles (G)

Name: \_\_\_\_\_

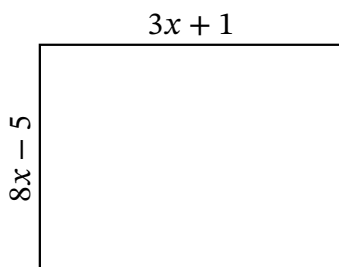
Date: \_\_\_\_\_

Score: \_\_\_\_\_

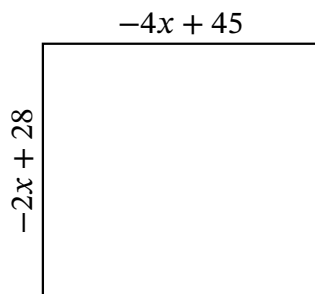
Determine the Value of  $x$ , Length, Width and Area for each rectangle.



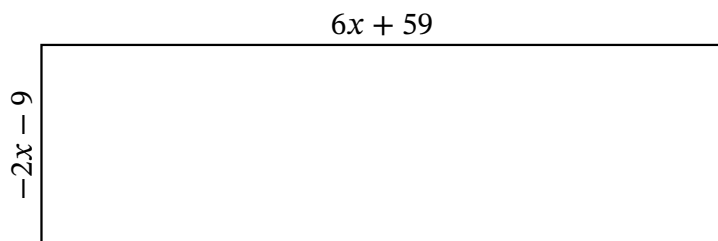
Perimeter: yd  
 Value of  $x$ : yd  
 Length: yd  
 Width: yd  
 Area:  $\text{yd}^2$



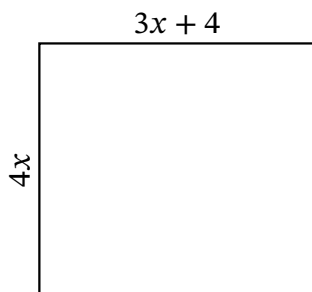
Perimeter: in  
 Value of  $x$ : in  
 Length: in  
 Width: in  
 Area:  $\text{in}^2$



Perimeter: mi  
 Value of  $x$ : mi  
 Length: mi  
 Width: mi  
 Area:  $\text{mi}^2$



Perimeter: m  
 Value of  $x$ : m  
 Length: m  
 Width: m  
 Area:  $\text{m}^2$



Perimeter: mm  
 Value of  $x$ : mm  
 Length: mm  
 Width: mm  
 Area:  $\text{mm}^2$

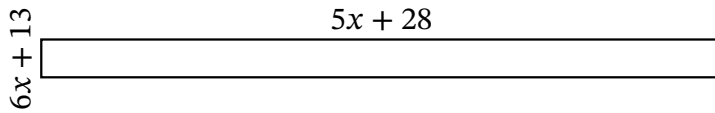
# Algebra Rectangles (G) Answers

Name: \_\_\_\_\_

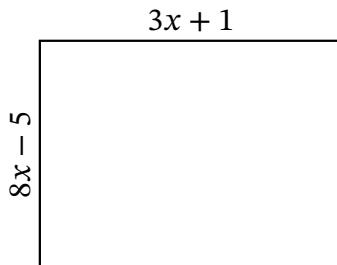
Date: \_\_\_\_\_

Score: \_\_\_\_\_

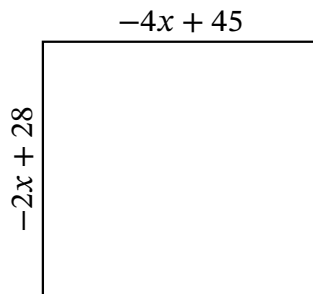
Determine the Value of  $x$ , Length, Width and Area for each rectangle.



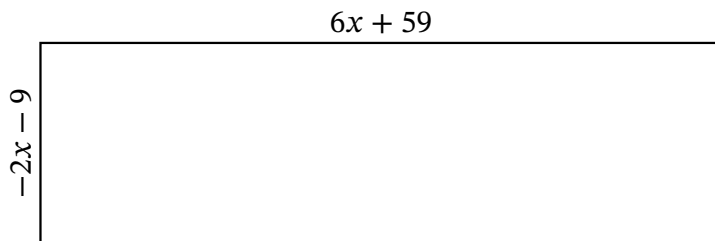
Perimeter: yd  
 Value of  $x$ : yd  
 Length: yd  
 Width: yd  
 Area:  $\text{yd}^2$



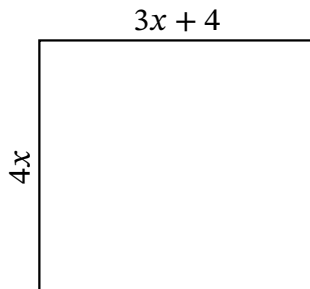
Perimeter: in  
 Value of  $x$ : in  
 Length: in  
 Width: in  
 Area:  $\text{in}^2$



Perimeter: mi  
 Value of  $x$ : mi  
 Length: mi  
 Width: mi  
 Area:  $\text{mi}^2$



Perimeter: m  
 Value of  $x$ : m  
 Length: m  
 Width: m  
 Area:  $\text{m}^2$



Perimeter: mm  
 Value of  $x$ : mm  
 Length: mm  
 Width: mm  
 Area:  $\text{mm}^2$