

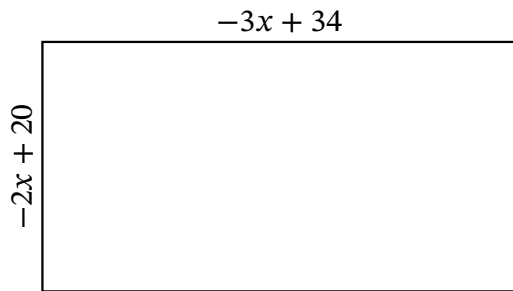
# Algebra Rectangles (F)

Name: \_\_\_\_\_

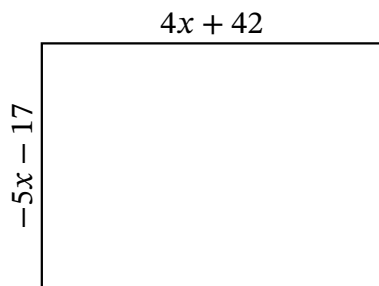
Date: \_\_\_\_\_

Score: \_\_\_\_\_

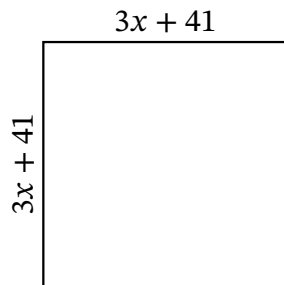
Determine the Value of  $x$ , Length, Width and Area for each rectangle.



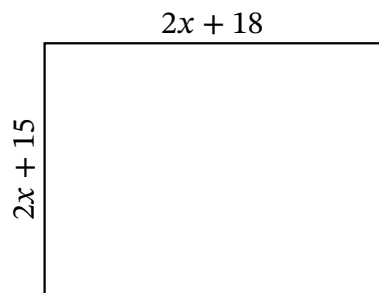
Perimeter:            yd  
 Value of  $x$ :            yd  
 Length:                yd  
 Width:                 yd  
 Area:                    yd<sup>2</sup>



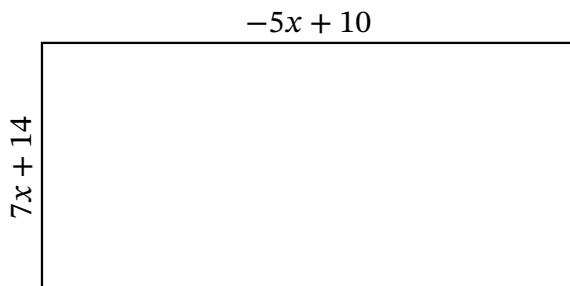
Perimeter:            m  
 Value of  $x$ :            m  
 Length:                m  
 Width:                 m  
 Area:                    m<sup>2</sup>



Perimeter:            mi  
 Value of  $x$ :            mi  
 Length:                mi  
 Width:                 mi  
 Area:                    mi<sup>2</sup>



Perimeter:            cm  
 Value of  $x$ :            cm  
 Length:                cm  
 Width:                 cm  
 Area:                    cm<sup>2</sup>



Perimeter:            mm  
 Value of  $x$ :            mm  
 Length:                mm  
 Width:                 mm  
 Area:                    mm<sup>2</sup>