

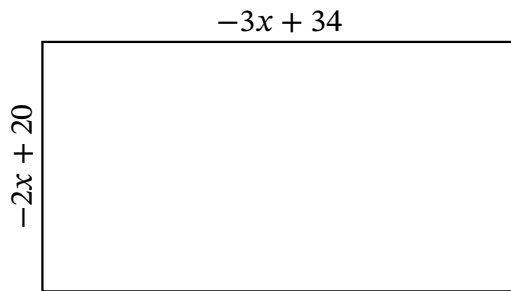
# Algebra Rectangles (F)

Name: \_\_\_\_\_

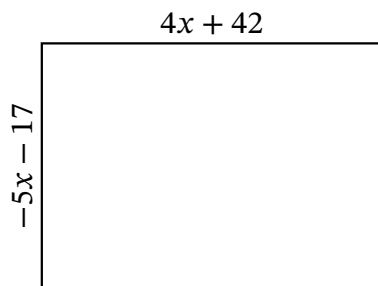
Date: \_\_\_\_\_

Score: \_\_\_\_\_

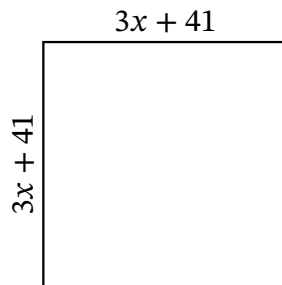
Determine the Value of  $x$ , Length, Width and Area for each rectangle.



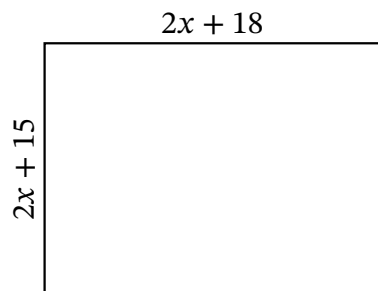
Perimeter: yd  
Value of  $x$ : yd  
Length: yd  
Width: yd  
Area:  $\text{yd}^2$



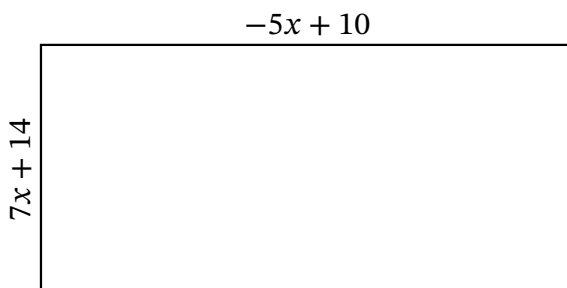
Perimeter: m  
Value of  $x$ : m  
Length: m  
Width: m  
Area:  $\text{m}^2$



Perimeter: mi  
Value of  $x$ : mi  
Length: mi  
Width: mi  
Area:  $\text{mi}^2$



Perimeter: cm  
Value of  $x$ : cm  
Length: cm  
Width: cm  
Area:  $\text{cm}^2$



Perimeter: mm  
Value of  $x$ : mm  
Length: mm  
Width: mm  
Area:  $\text{mm}^2$

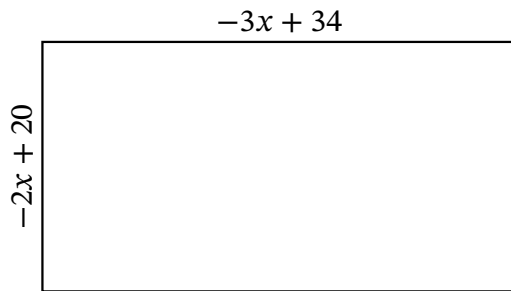
# Algebra Rectangles (F) Answers

Name: \_\_\_\_\_

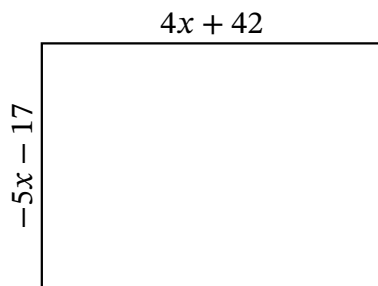
Date: \_\_\_\_\_

Score: \_\_\_\_\_

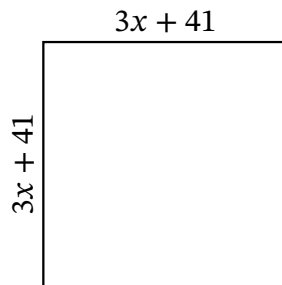
Determine the Value of  $x$ , Length, Width and Area for each rectangle.



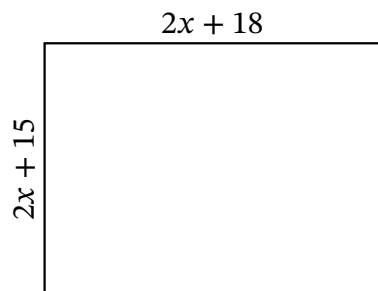
Perimeter: yd  
Value of  $x$ : yd  
Length: yd  
Width: yd  
Area:  $\text{yd}^2$



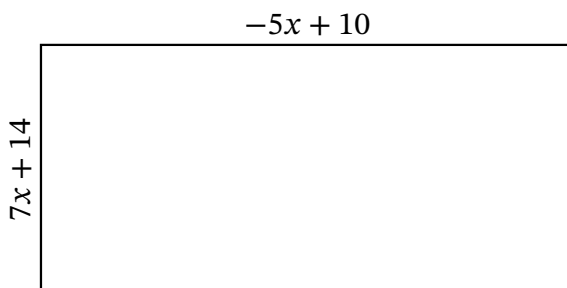
Perimeter: m  
Value of  $x$ : m  
Length: m  
Width: m  
Area:  $\text{m}^2$



Perimeter: mi  
Value of  $x$ : mi  
Length: mi  
Width: mi  
Area:  $\text{mi}^2$



Perimeter: cm  
Value of  $x$ : cm  
Length: cm  
Width: cm  
Area:  $\text{cm}^2$



Perimeter: mm  
Value of  $x$ : mm  
Length: mm  
Width: mm  
Area:  $\text{mm}^2$