

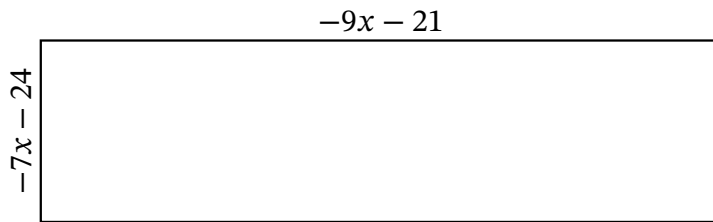
Algebra Rectangles (E)

Name: _____

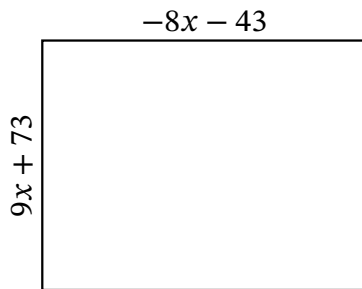
Date: _____

Score: _____

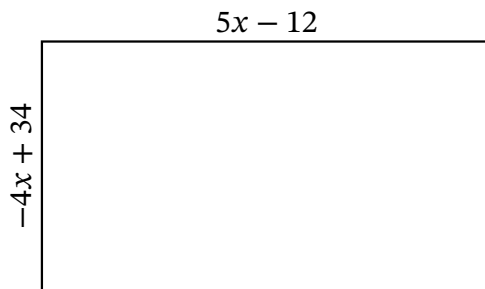
Determine the Value of x , Length, Width and Area for each rectangle.



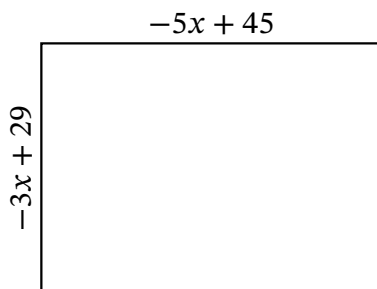
Perimeter: mi
Value of x : mi
Length: mi
Width: mi
Area: mi^2



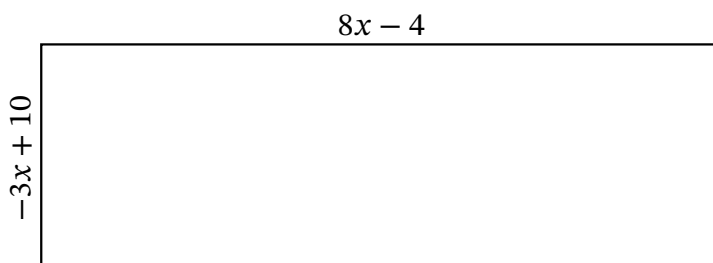
Perimeter: ft
Value of x : ft
Length: ft
Width: ft
Area: ft^2



Perimeter: mm
Value of x : mm
Length: mm
Width: mm
Area: mm^2



Perimeter: m
Value of x : m
Length: m
Width: m
Area: m^2



Perimeter: cm
Value of x : cm
Length: cm
Width: cm
Area: cm^2

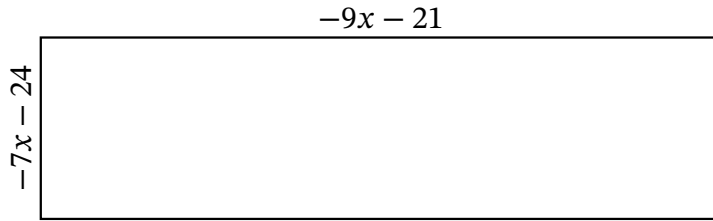
Algebra Rectangles (E) Answers

Name: _____

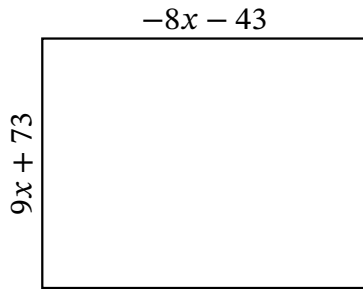
Date: _____

Score: _____

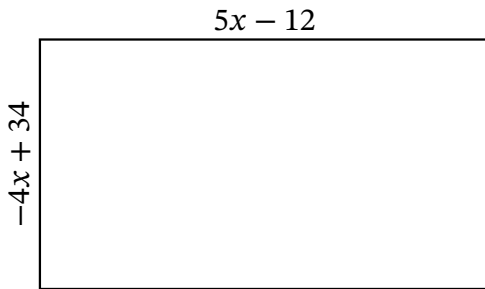
Determine the Value of x , Length, Width and Area for each rectangle.



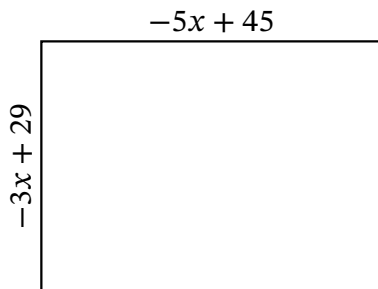
Perimeter: mi
 Value of x : mi
 Length: mi
 Width: mi
 Area: mi^2



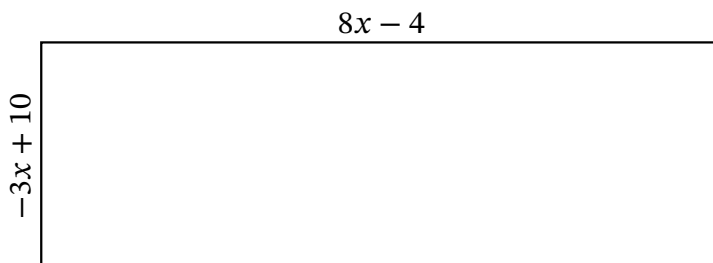
Perimeter: ft
 Value of x : ft
 Length: ft
 Width: ft
 Area: ft^2



Perimeter: mm
 Value of x : mm
 Length: mm
 Width: mm
 Area: mm^2



Perimeter: m
 Value of x : m
 Length: m
 Width: m
 Area: m^2



Perimeter: cm
 Value of x : cm
 Length: cm
 Width: cm
 Area: cm^2