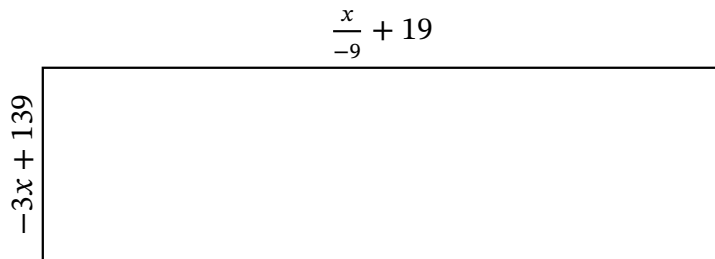


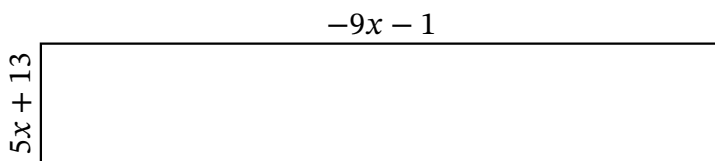
Algebra Rectangles (A)

Name: _____ Date: _____ Score: _____

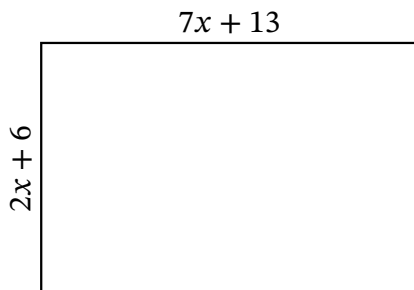
Determine the Value of x, Length, Width and Area for each rectangle.



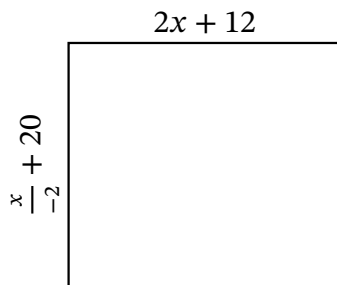
Perimeter: yd
 Value of x: yd
 Length: yd
 Width: yd
 Area: yd^2



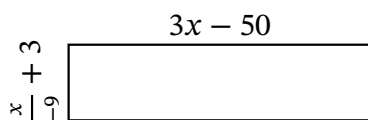
Perimeter: in
 Value of x: in
 Length: in
 Width: in
 Area: in^2



Perimeter: km
 Value of x: km
 Length: km
 Width: km
 Area: km^2



Perimeter: ft
 Value of x: ft
 Length: ft
 Width: ft
 Area: ft^2

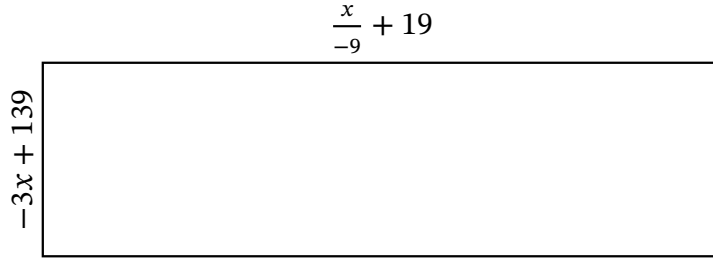


Perimeter: μm
 Value of x: μm
 Length: μm
 Width: μm
 Area: μm^2

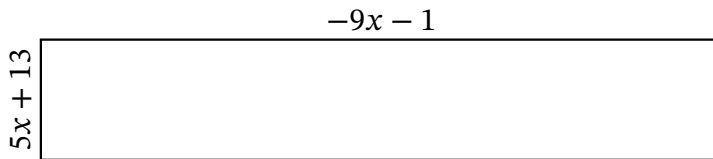
Algebra Rectangles (A) Answers

Name: _____ Date: _____ Score: _____

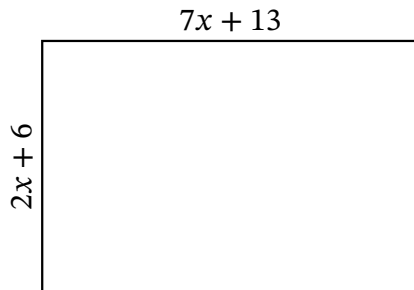
Determine the Value of x, Length, Width and Area for each rectangle.



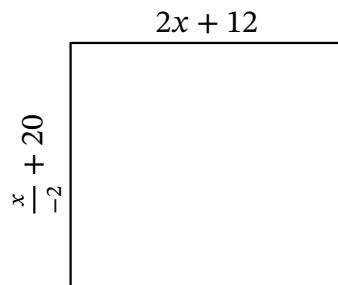
Perimeter: yd
 Value of x: yd
 Length: yd
 Width: yd
 Area: yd^2



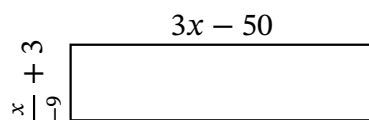
Perimeter: in
 Value of x: in
 Length: in
 Width: in
 Area: in^2



Perimeter: km
 Value of x: km
 Length: km
 Width: km
 Area: km^2



Perimeter: ft
 Value of x: ft
 Length: ft
 Width: ft
 Area: ft^2



Perimeter: μm
 Value of x: μm
 Length: μm
 Width: μm
 Area: μm^2

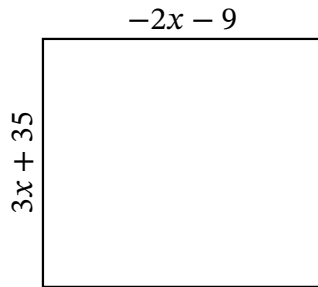
Algebra Rectangles (B)

Name: _____

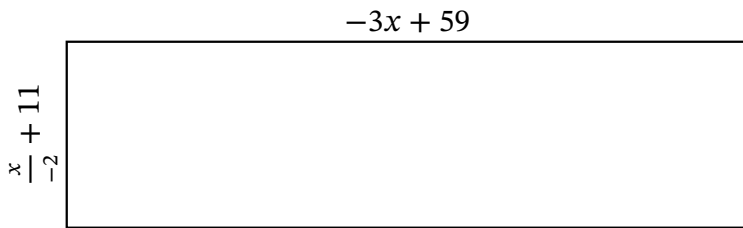
Date: _____

Score: _____

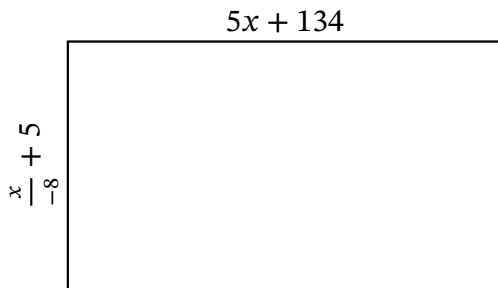
Determine the Value of x , Length, Width and Area for each rectangle.



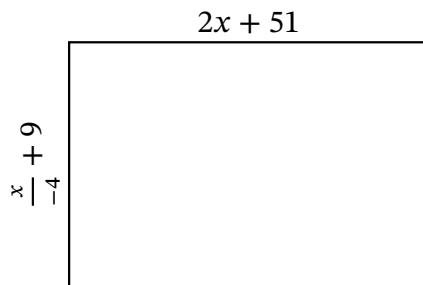
Perimeter: _____ in
 Value of x : _____ in
 Length: _____ in
 Width: _____ in
 Area: _____ in²



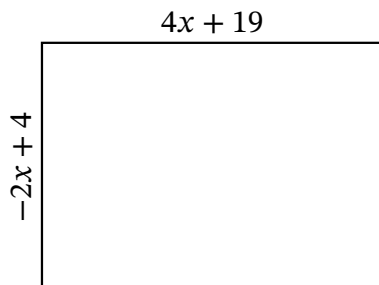
Perimeter: _____ mi
 Value of x : _____ mi
 Length: _____ mi
 Width: _____ mi
 Area: _____ mi²



Perimeter: _____ km
 Value of x : _____ km
 Length: _____ km
 Width: _____ km
 Area: _____ km²



Perimeter: _____ ft
 Value of x : _____ ft
 Length: _____ ft
 Width: _____ ft
 Area: _____ ft²



Perimeter: _____ μm
 Value of x : _____ μm
 Length: _____ μm
 Width: _____ μm
 Area: _____ μm²

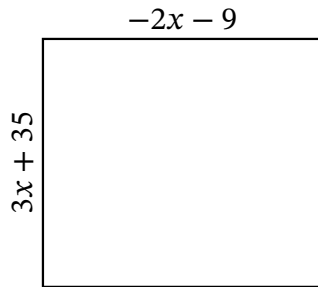
Algebra Rectangles (B) Answers

Name: _____

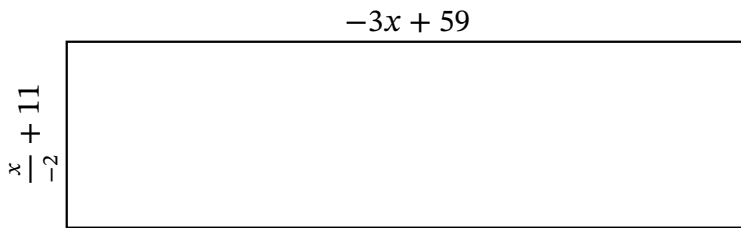
Date: _____

Score: _____

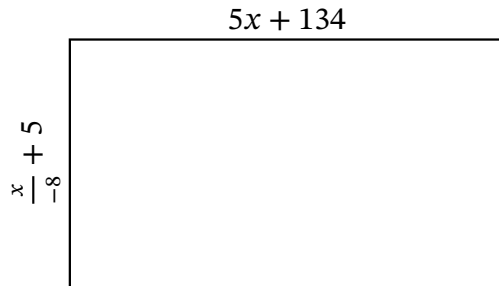
Determine the Value of x , Length, Width and Area for each rectangle.



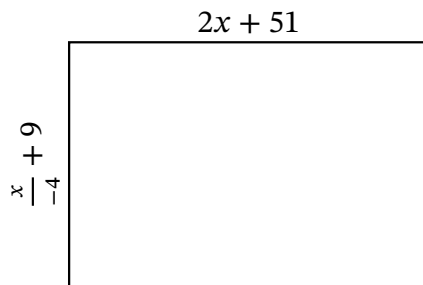
Perimeter: _____ in
 Value of x : _____ in
 Length: _____ in
 Width: _____ in
 Area: _____ in²



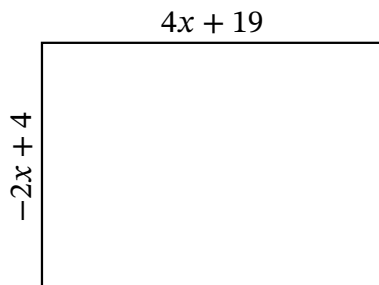
Perimeter: _____ mi
 Value of x : _____ mi
 Length: _____ mi
 Width: _____ mi
 Area: _____ mi²



Perimeter: _____ km
 Value of x : _____ km
 Length: _____ km
 Width: _____ km
 Area: _____ km²



Perimeter: _____ ft
 Value of x : _____ ft
 Length: _____ ft
 Width: _____ ft
 Area: _____ ft²



Perimeter: _____ μm
 Value of x : _____ μm
 Length: _____ μm
 Width: _____ μm
 Area: _____ μm^2

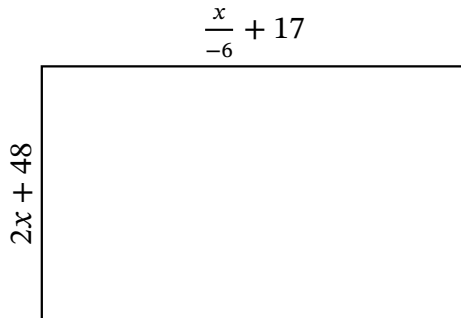
Algebra Rectangles (C)

Name: _____

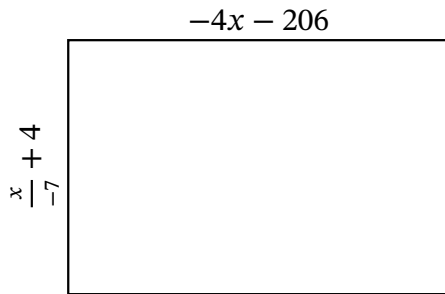
Date: _____

Score: _____

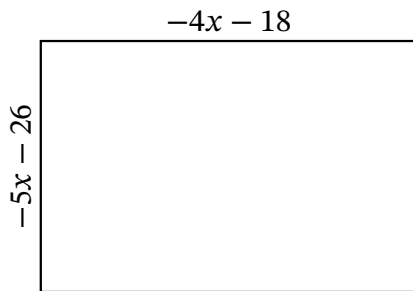
Determine the Value of x , Length, Width and Area for each rectangle.



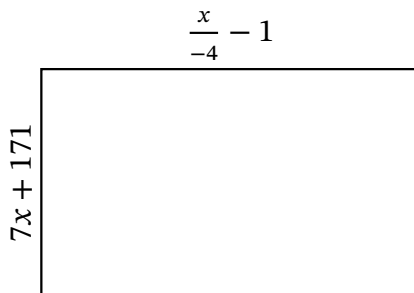
Perimeter: km
 Value of x : km
 Length: km
 Width: km
 Area: km^2



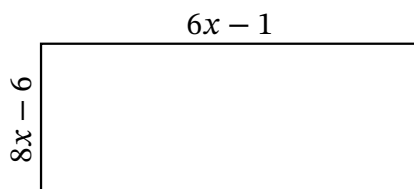
Perimeter: nm
 Value of x : nm
 Length: nm
 Width: nm
 Area: nm^2



Perimeter: in
 Value of x : in
 Length: in
 Width: in
 Area: in^2



Perimeter: yd
 Value of x : yd
 Length: yd
 Width: yd
 Area: yd^2



Perimeter: ft
 Value of x : ft
 Length: ft
 Width: ft
 Area: ft^2

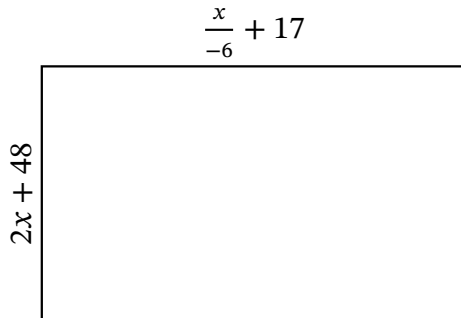
Algebra Rectangles (C) Answers

Name: _____

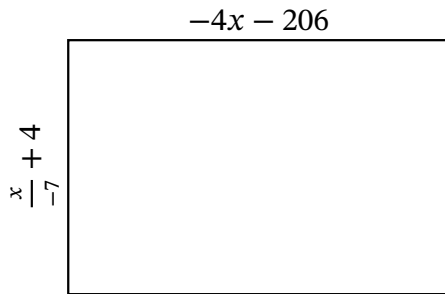
Date: _____

Score: _____

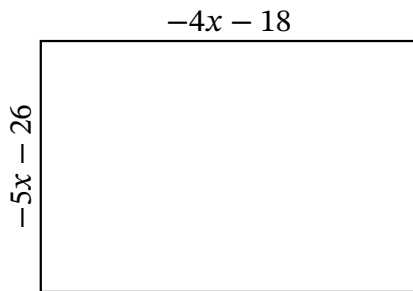
Determine the Value of x , Length, Width and Area for each rectangle.



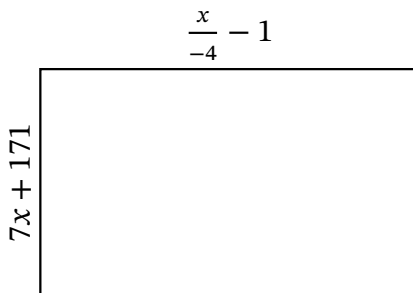
Perimeter: km
 Value of x : km
 Length: km
 Width: km
 Area: km^2



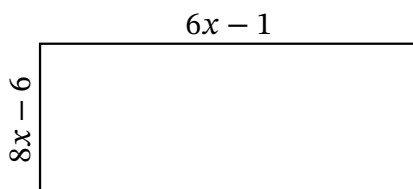
Perimeter: nm
 Value of x : nm
 Length: nm
 Width: nm
 Area: nm^2



Perimeter: in
 Value of x : in
 Length: in
 Width: in
 Area: in^2



Perimeter: yd
 Value of x : yd
 Length: yd
 Width: yd
 Area: yd^2



Perimeter: ft
 Value of x : ft
 Length: ft
 Width: ft
 Area: ft^2

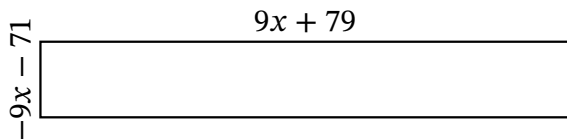
Algebra Rectangles (D)

Name: _____

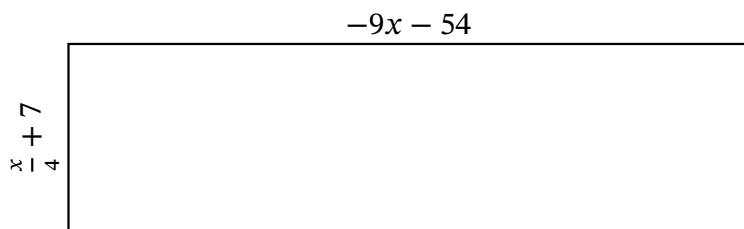
Date: _____

Score: _____

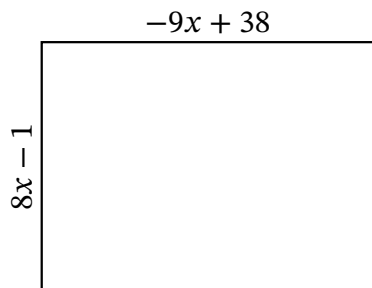
Determine the Value of x , Length, Width and Area for each rectangle.



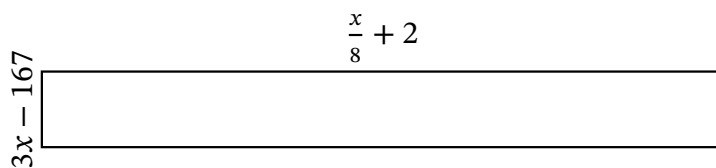
Perimeter: ft
 Value of x : ft
 Length: ft
 Width: ft
 Area: ft^2



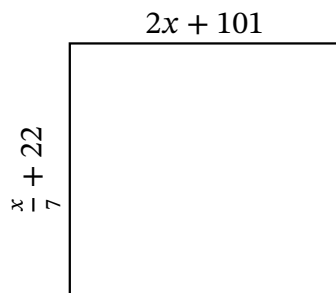
Perimeter: mm
 Value of x : mm
 Length: mm
 Width: mm
 Area: mm^2



Perimeter: in
 Value of x : in
 Length: in
 Width: in
 Area: in^2



Perimeter: mi
 Value of x : mi
 Length: mi
 Width: mi
 Area: mi^2



Perimeter: km
 Value of x : km
 Length: km
 Width: km
 Area: km^2

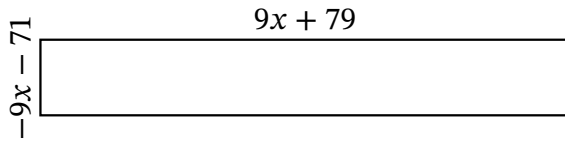
Algebra Rectangles (D) Answers

Name: _____

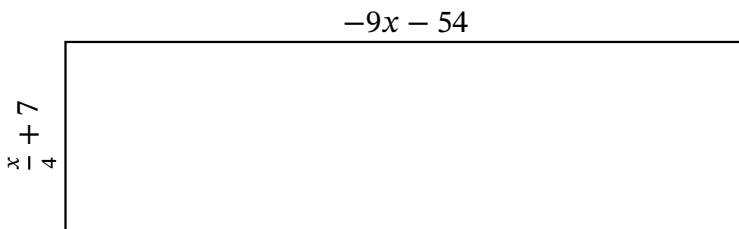
Date: _____

Score: _____

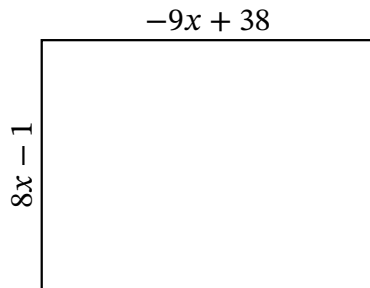
Determine the Value of x , Length, Width and Area for each rectangle.



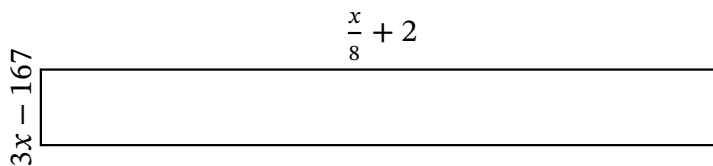
Perimeter: ft
 Value of x : ft
 Length: ft
 Width: ft
 Area: ft^2



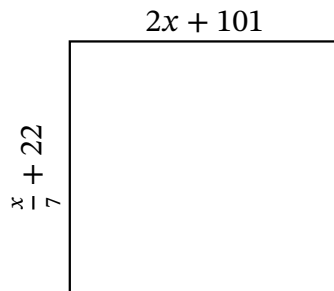
Perimeter: mm
 Value of x : mm
 Length: mm
 Width: mm
 Area: mm^2



Perimeter: in
 Value of x : in
 Length: in
 Width: in
 Area: in^2



Perimeter: mi
 Value of x : mi
 Length: mi
 Width: mi
 Area: mi^2



Perimeter: km
 Value of x : km
 Length: km
 Width: km
 Area: km^2

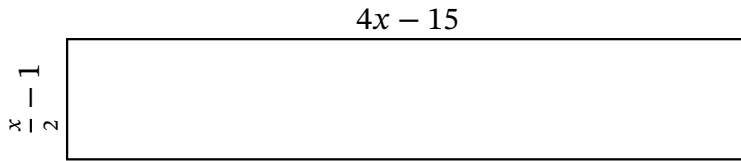
Algebra Rectangles (E)

Name: _____

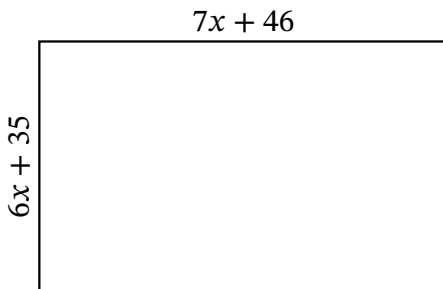
Date: _____

Score: _____

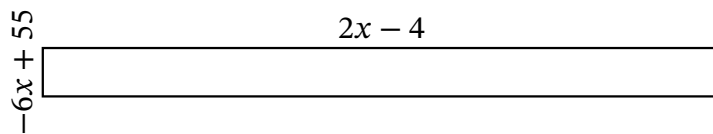
Determine the Value of x , Length, Width and Area for each rectangle.



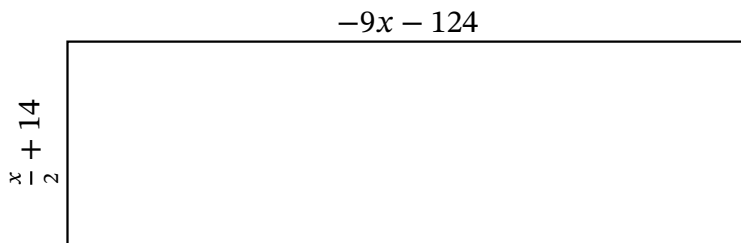
Perimeter: m
 Value of x : m
 Length: m
 Width: m
 Area: m^2



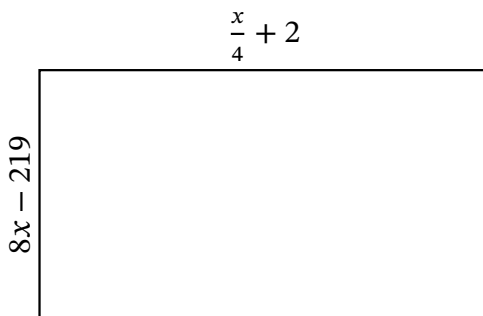
Perimeter: cm
 Value of x : cm
 Length: cm
 Width: cm
 Area: cm^2



Perimeter: yd
 Value of x : yd
 Length: yd
 Width: yd
 Area: yd^2



Perimeter: ft
 Value of x : ft
 Length: ft
 Width: ft
 Area: ft^2



Perimeter: μm
 Value of x : μm
 Length: μm
 Width: μm
 Area: μm^2

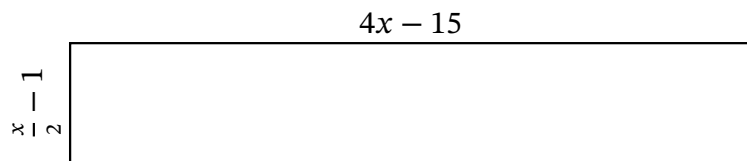
Algebra Rectangles (E) Answers

Name: _____

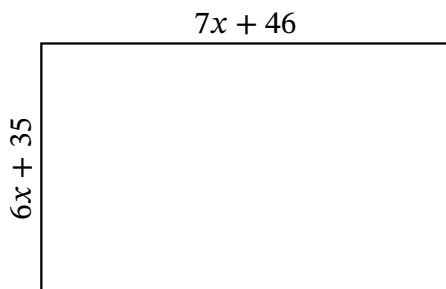
Date: _____

Score: _____

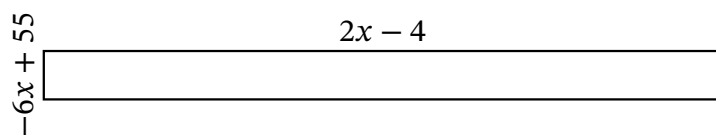
Determine the Value of x , Length, Width and Area for each rectangle.



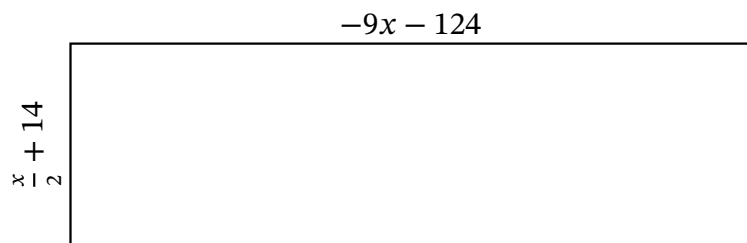
Perimeter: m
 Value of x : m
 Length: m
 Width: m
 Area: m^2



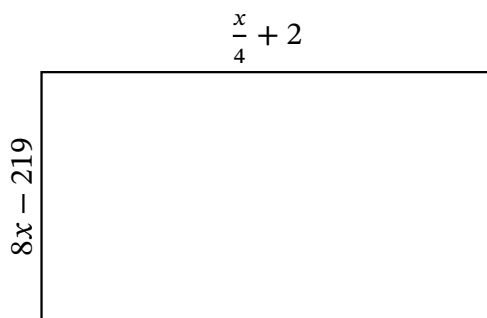
Perimeter: cm
 Value of x : cm
 Length: cm
 Width: cm
 Area: cm^2



Perimeter: yd
 Value of x : yd
 Length: yd
 Width: yd
 Area: yd^2



Perimeter: ft
 Value of x : ft
 Length: ft
 Width: ft
 Area: ft^2



Perimeter: μm
 Value of x : μm
 Length: μm
 Width: μm
 Area: μm^2

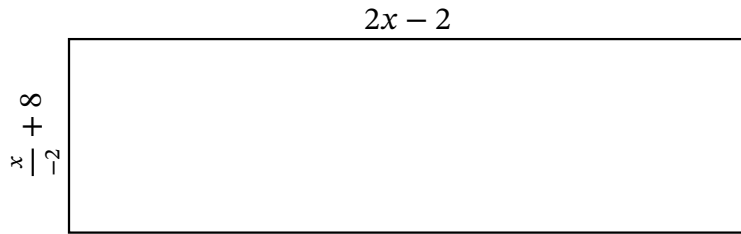
Algebra Rectangles (F)

Name: _____

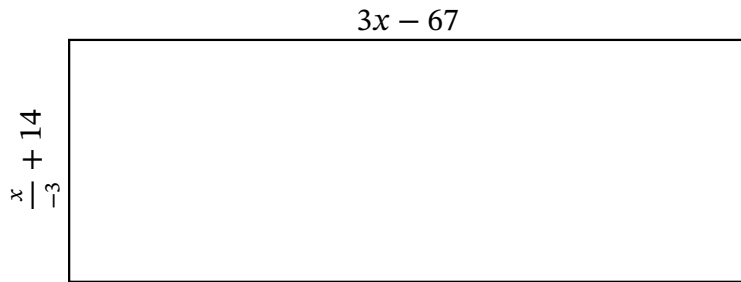
Date: _____

Score: _____

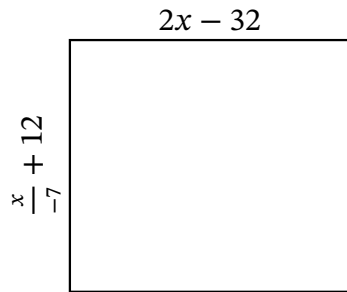
Determine the Value of x , Length, Width and Area for each rectangle.



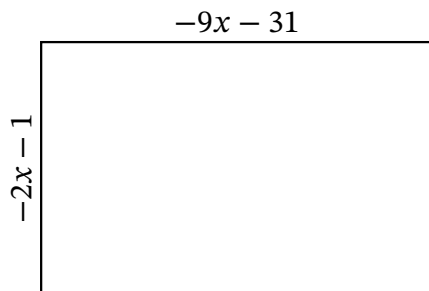
Perimeter: km
 Value of x : km
 Length: km
 Width: km
 Area: km^2



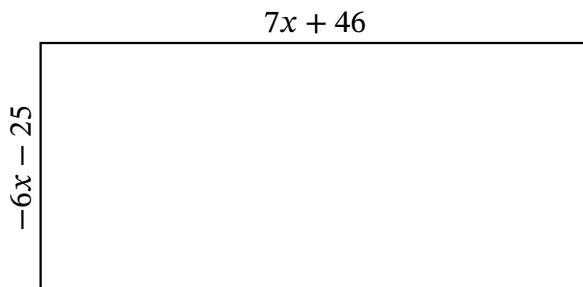
Perimeter: nm
 Value of x : nm
 Length: nm
 Width: nm
 Area: nm^2



Perimeter: ft
 Value of x : ft
 Length: ft
 Width: ft
 Area: ft^2



Perimeter: cm
 Value of x : cm
 Length: cm
 Width: cm
 Area: cm^2



Perimeter: mm
 Value of x : mm
 Length: mm
 Width: mm
 Area: mm^2

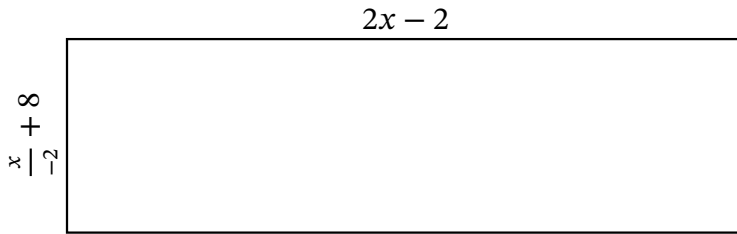
Algebra Rectangles (F) Answers

Name: _____

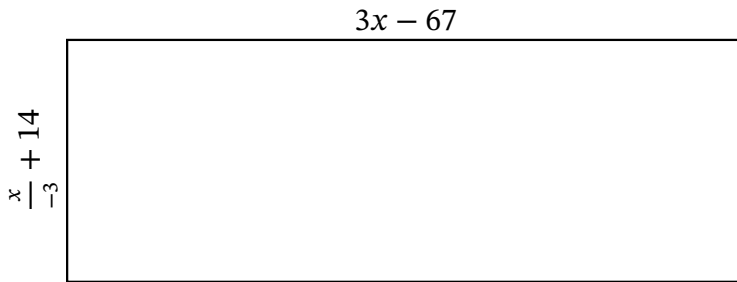
Date: _____

Score: _____

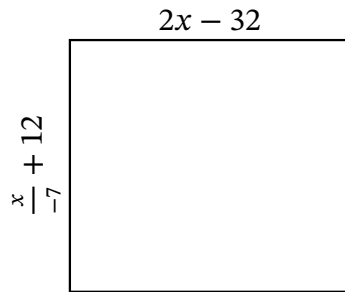
Determine the Value of x , Length, Width and Area for each rectangle.



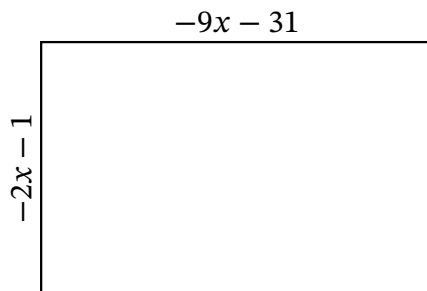
Perimeter: km
 Value of x : km
 Length: km
 Width: km
 Area: km^2



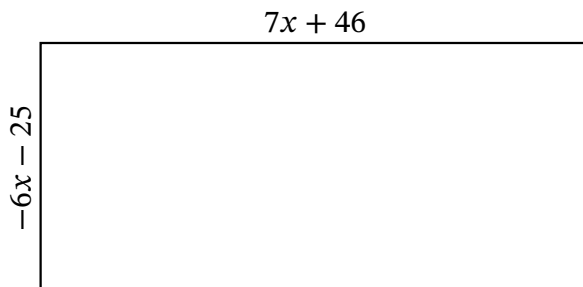
Perimeter: nm
 Value of x : nm
 Length: nm
 Width: nm
 Area: nm^2



Perimeter: ft
 Value of x : ft
 Length: ft
 Width: ft
 Area: ft^2



Perimeter: cm
 Value of x : cm
 Length: cm
 Width: cm
 Area: cm^2



Perimeter: mm
 Value of x : mm
 Length: mm
 Width: mm
 Area: mm^2

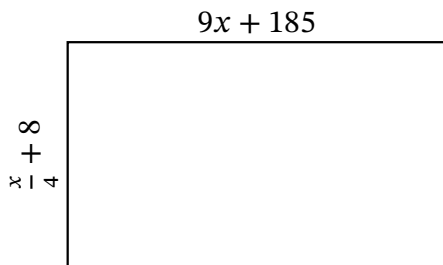
Algebra Rectangles (G)

Name: _____

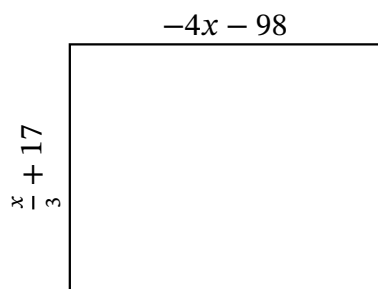
Date: _____

Score: _____

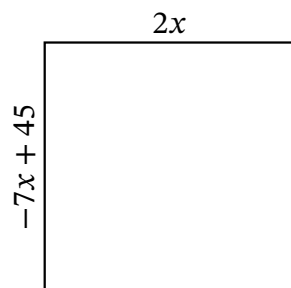
Determine the Value of x , Length, Width and Area for each rectangle.



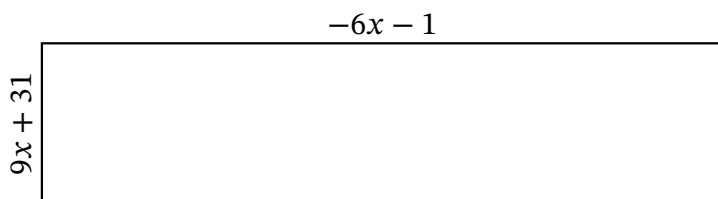
Perimeter: nm
 Value of x : nm
 Length: nm
 Width: nm
 Area: nm^2



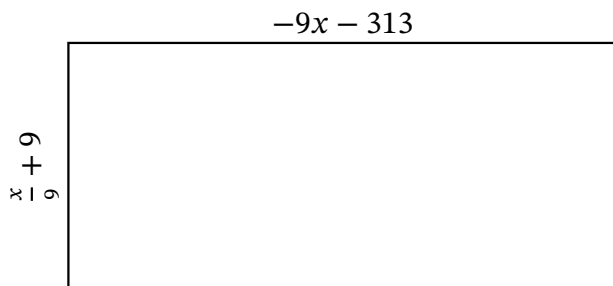
Perimeter: yd
 Value of x : yd
 Length: yd
 Width: yd
 Area: yd^2



Perimeter: ft
 Value of x : ft
 Length: ft
 Width: ft
 Area: ft^2



Perimeter: m
 Value of x : m
 Length: m
 Width: m
 Area: m^2



Perimeter: in
 Value of x : in
 Length: in
 Width: in
 Area: in^2

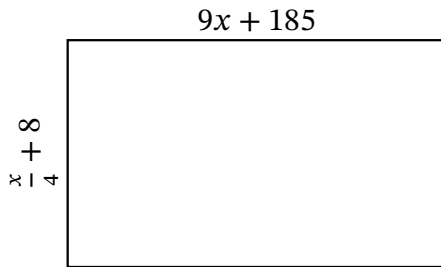
Algebra Rectangles (G) Answers

Name: _____

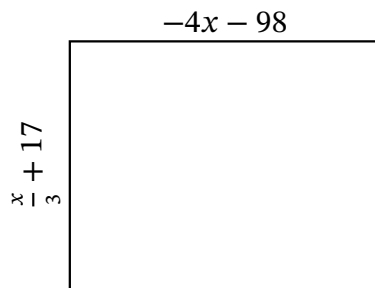
Date: _____

Score: _____

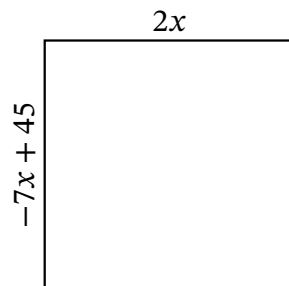
Determine the Value of x , Length, Width and Area for each rectangle.



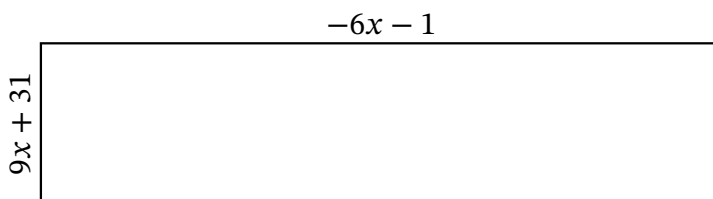
Perimeter: nm
 Value of x : nm
 Length: nm
 Width: nm
 Area: nm^2



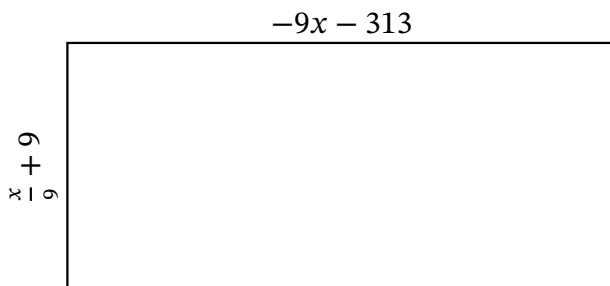
Perimeter: yd
 Value of x : yd
 Length: yd
 Width: yd
 Area: yd^2



Perimeter: ft
 Value of x : ft
 Length: ft
 Width: ft
 Area: ft^2



Perimeter: m
 Value of x : m
 Length: m
 Width: m
 Area: m^2



Perimeter: in
 Value of x : in
 Length: in
 Width: in
 Area: in^2

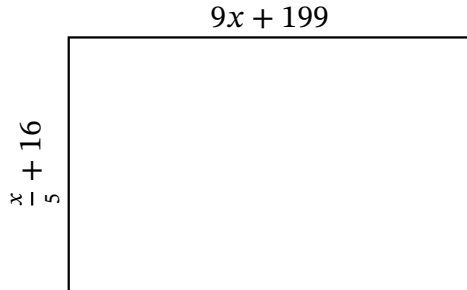
Algebra Rectangles (H)

Name: _____

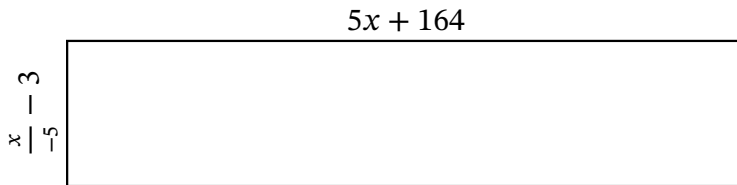
Date: _____

Score: _____

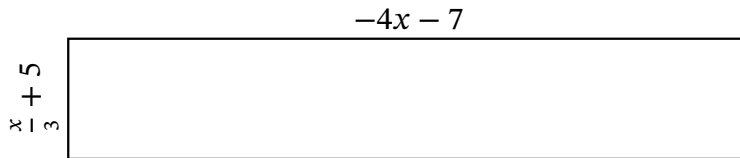
Determine the Value of x , Length, Width and Area for each rectangle.



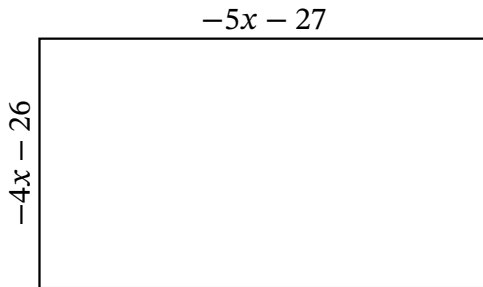
Perimeter: _____ mi
Value of x : _____ mi
Length: _____ mi
Width: _____ mi
Area: _____ mi^2



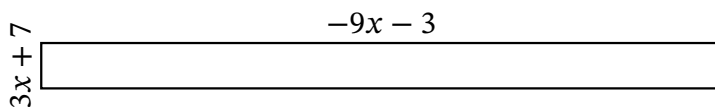
Perimeter: _____ m
Value of x : _____ m
Length: _____ m
Width: _____ m
Area: _____ m^2



Perimeter: _____ nm
Value of x : _____ nm
Length: _____ nm
Width: _____ nm
Area: _____ nm^2



Perimeter: _____ yd
Value of x : _____ yd
Length: _____ yd
Width: _____ yd
Area: _____ yd^2



Perimeter: _____ km
Value of x : _____ km
Length: _____ km
Width: _____ km
Area: _____ km^2

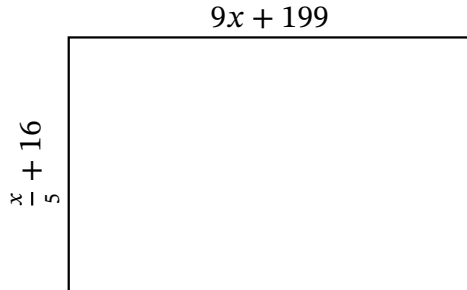
Algebra Rectangles (H) Answers

Name: _____

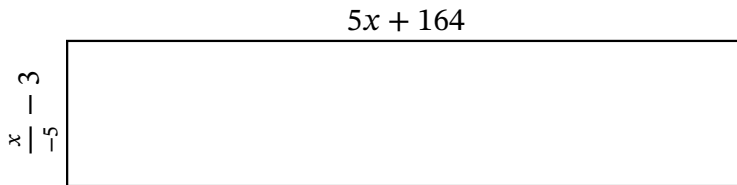
Date: _____

Score: _____

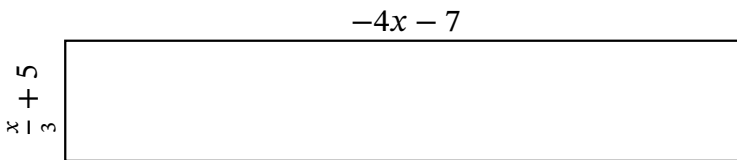
Determine the Value of x , Length, Width and Area for each rectangle.



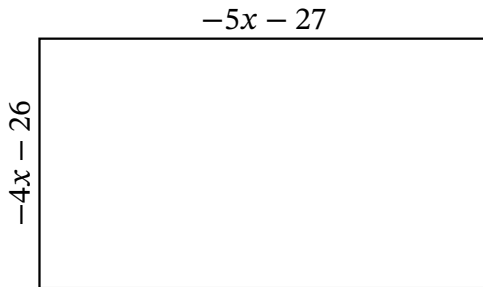
Perimeter: mi
 Value of x : mi
 Length: mi
 Width: mi
 Area: mi²



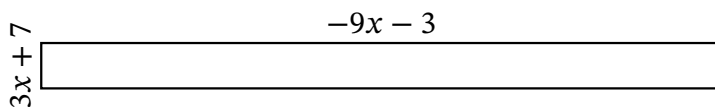
Perimeter: m
 Value of x : m
 Length: m
 Width: m
 Area: m²



Perimeter: nm
 Value of x : nm
 Length: nm
 Width: nm
 Area: nm²



Perimeter: yd
 Value of x : yd
 Length: yd
 Width: yd
 Area: yd²



Perimeter: km
 Value of x : km
 Length: km
 Width: km
 Area: km²

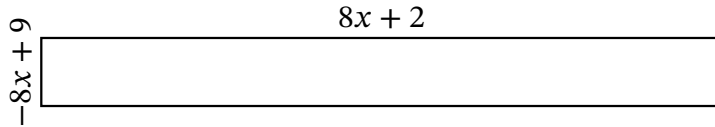
Algebra Rectangles (I)

Name: _____

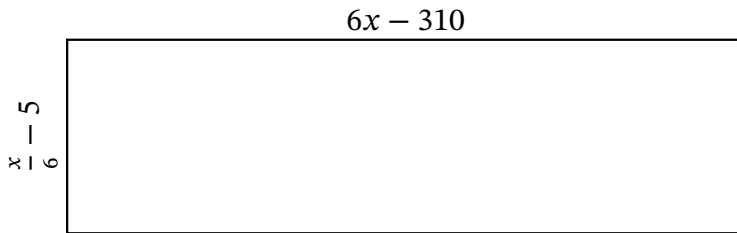
Date: _____

Score: _____

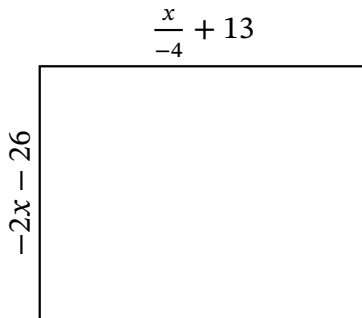
Determine the Value of x , Length, Width and Area for each rectangle.



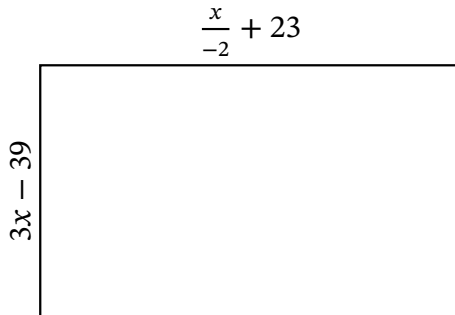
Perimeter: mi
 Value of x : mi
 Length: mi
 Width: mi
 Area: mi^2



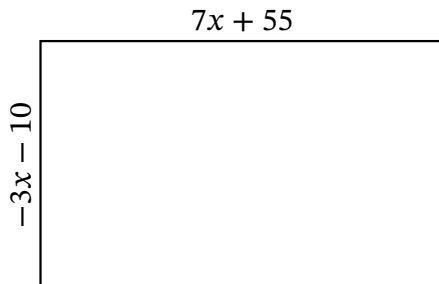
Perimeter: mm
 Value of x : mm
 Length: mm
 Width: mm
 Area: mm^2



Perimeter: μm
 Value of x : μm
 Length: μm
 Width: μm
 Area: μm^2



Perimeter: yd
 Value of x : yd
 Length: yd
 Width: yd
 Area: yd^2



Perimeter: m
 Value of x : m
 Length: m
 Width: m
 Area: m^2

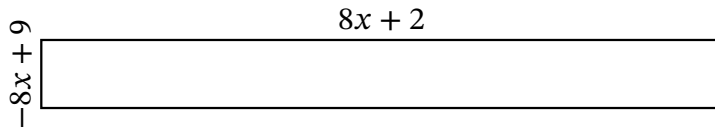
Algebra Rectangles (I) Answers

Name: _____

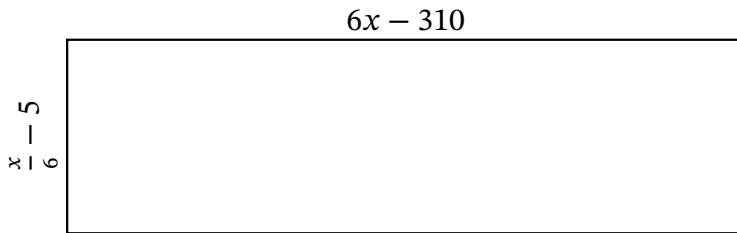
Date: _____

Score: _____

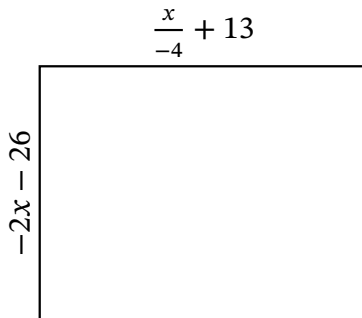
Determine the Value of x , Length, Width and Area for each rectangle.



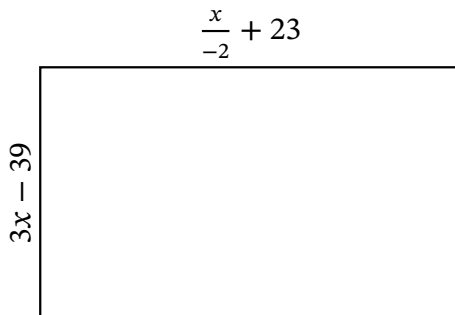
Perimeter: mi
 Value of x : mi
 Length: mi
 Width: mi
 Area: mi^2



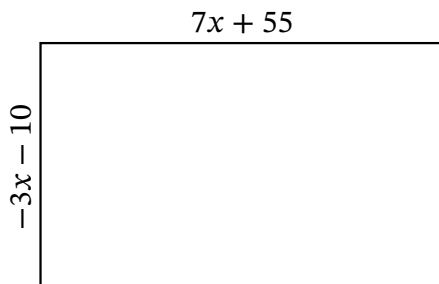
Perimeter: mm
 Value of x : mm
 Length: mm
 Width: mm
 Area: mm^2



Perimeter: μm
 Value of x : μm
 Length: μm
 Width: μm
 Area: μm^2



Perimeter: yd
 Value of x : yd
 Length: yd
 Width: yd
 Area: yd^2



Perimeter: m
 Value of x : m
 Length: m
 Width: m
 Area: m^2

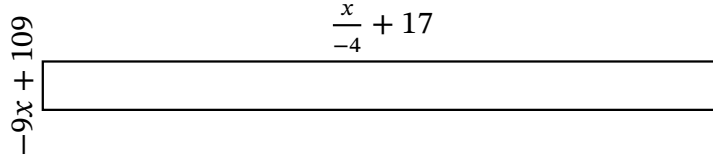
Algebra Rectangles (J)

Name: _____

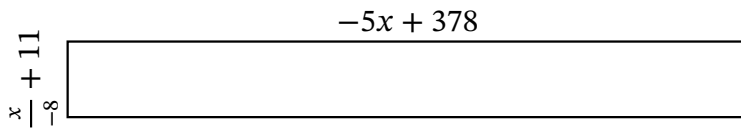
Date: _____

Score: _____

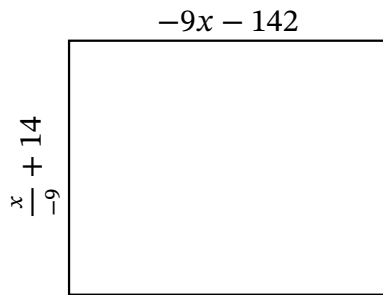
Determine the Value of x , Length, Width and Area for each rectangle.



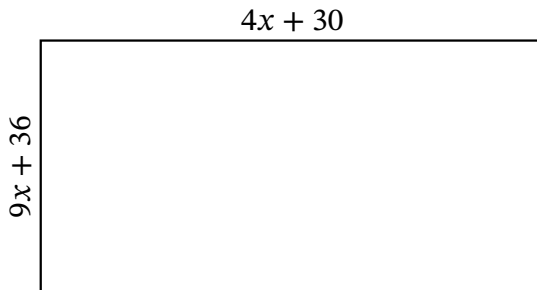
Perimeter: cm
 Value of x : cm
 Length: cm
 Width: cm
 Area: cm^2



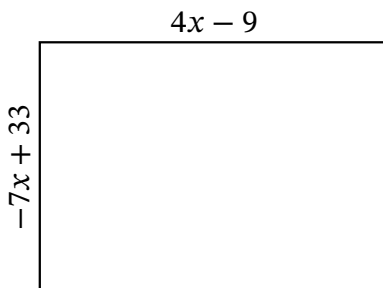
Perimeter: km
 Value of x : km
 Length: km
 Width: km
 Area: km^2



Perimeter: mi
 Value of x : mi
 Length: mi
 Width: mi
 Area: mi^2



Perimeter: m
 Value of x : m
 Length: m
 Width: m
 Area: m^2

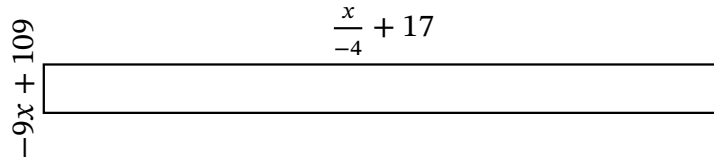


Perimeter: yd
 Value of x : yd
 Length: yd
 Width: yd
 Area: yd^2

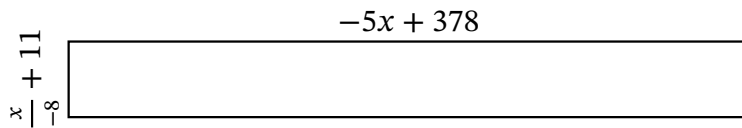
Algebra Rectangles (J) Answers

Name: _____ Date: _____ Score: _____

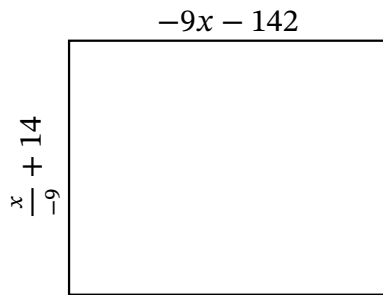
Determine the Value of x , Length, Width and Area for each rectangle.



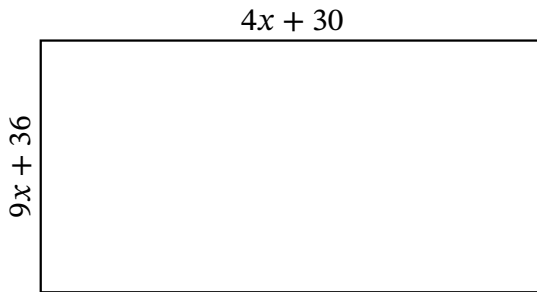
Perimeter: cm
 Value of x : cm
 Length: cm
 Width: cm
 Area: cm^2



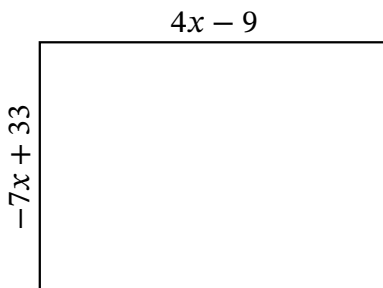
Perimeter: km
 Value of x : km
 Length: km
 Width: km
 Area: km^2



Perimeter: mi
 Value of x : mi
 Length: mi
 Width: mi
 Area: mi^2



Perimeter: m
 Value of x : m
 Length: m
 Width: m
 Area: m^2



Perimeter: yd
 Value of x : yd
 Length: yd
 Width: yd
 Area: yd^2