

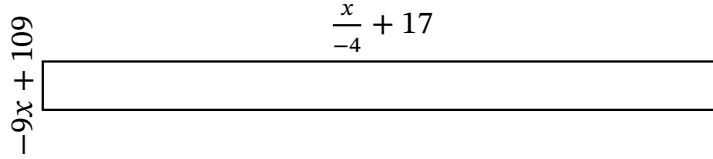
# Algebra Rectangles (J)

Name: \_\_\_\_\_

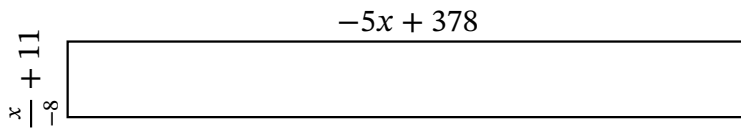
Date: \_\_\_\_\_

Score: \_\_\_\_\_

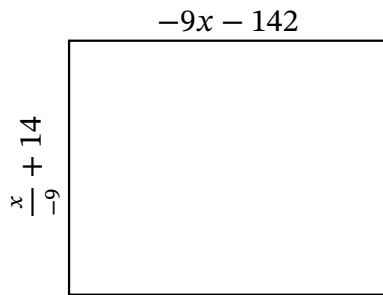
Determine the Value of  $x$ , Length, Width and Area for each rectangle.



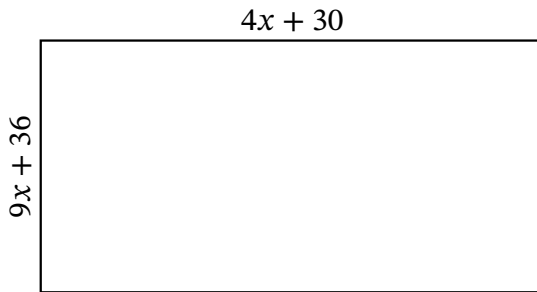
Perimeter: cm  
 Value of  $x$ : cm  
 Length: cm  
 Width: cm  
 Area:  $\text{cm}^2$



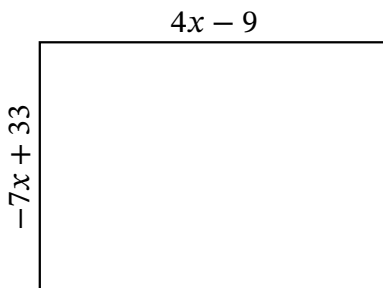
Perimeter: km  
 Value of  $x$ : km  
 Length: km  
 Width: km  
 Area:  $\text{km}^2$



Perimeter: mi  
 Value of  $x$ : mi  
 Length: mi  
 Width: mi  
 Area:  $\text{mi}^2$



Perimeter: m  
 Value of  $x$ : m  
 Length: m  
 Width: m  
 Area:  $\text{m}^2$



Perimeter: yd  
 Value of  $x$ : yd  
 Length: yd  
 Width: yd  
 Area:  $\text{yd}^2$