

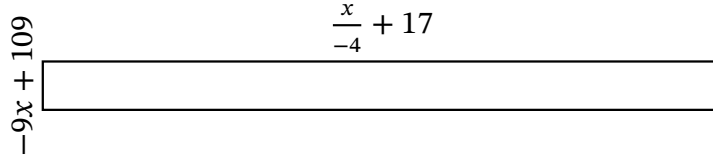
Algebra Rectangles (J)

Name: _____

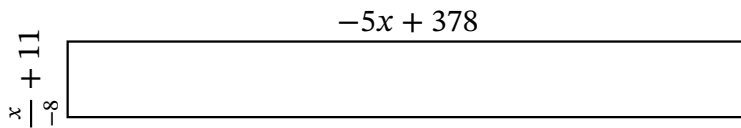
Date: _____

Score: _____

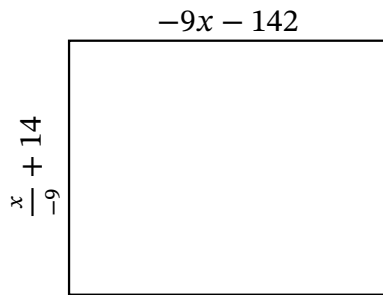
Determine the Value of x , Length, Width and Area for each rectangle.



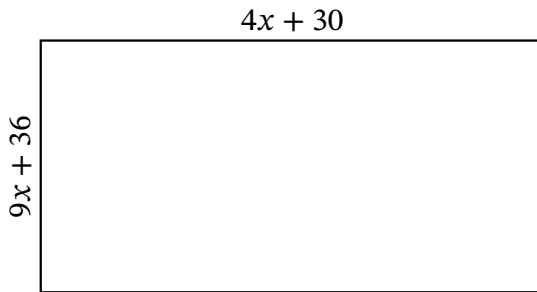
Perimeter: cm
 Value of x : cm
 Length: cm
 Width: cm
 Area: cm^2



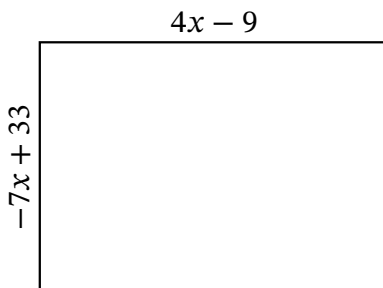
Perimeter: km
 Value of x : km
 Length: km
 Width: km
 Area: km^2



Perimeter: mi
 Value of x : mi
 Length: mi
 Width: mi
 Area: mi^2



Perimeter: m
 Value of x : m
 Length: m
 Width: m
 Area: m^2



Perimeter: yd
 Value of x : yd
 Length: yd
 Width: yd
 Area: yd^2

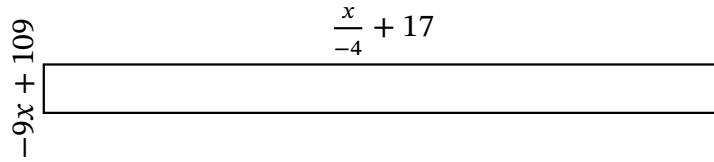
Algebra Rectangles (J) Answers

Name: _____

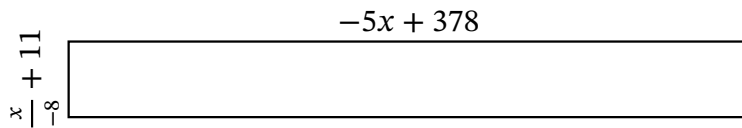
Date: _____

Score: _____

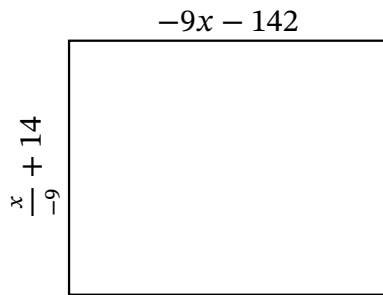
Determine the Value of x , Length, Width and Area for each rectangle.



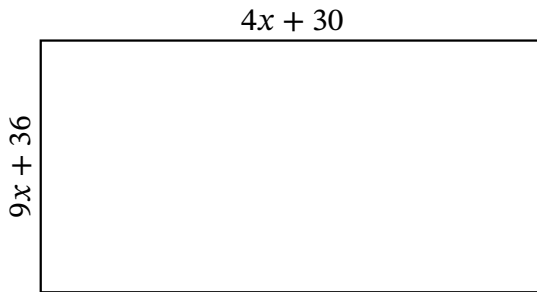
Perimeter: cm
 Value of x : cm
 Length: cm
 Width: cm
 Area: cm^2



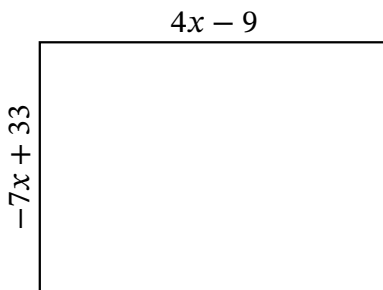
Perimeter: km
 Value of x : km
 Length: km
 Width: km
 Area: km^2



Perimeter: mi
 Value of x : mi
 Length: mi
 Width: mi
 Area: mi^2



Perimeter: m
 Value of x : m
 Length: m
 Width: m
 Area: m^2



Perimeter: yd
 Value of x : yd
 Length: yd
 Width: yd
 Area: yd^2