

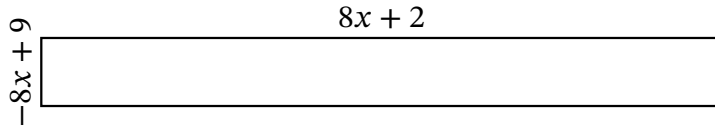
Algebra Rectangles (I)

Name: _____

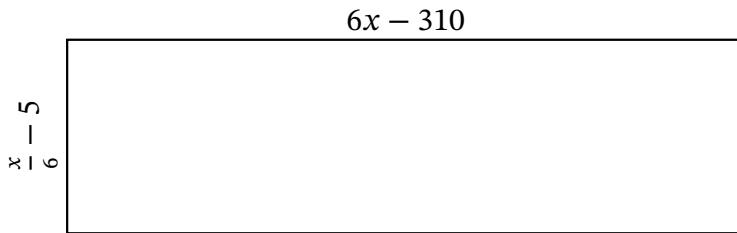
Date: _____

Score: _____

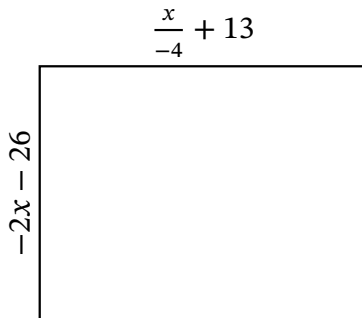
Determine the Value of x , Length, Width and Area for each rectangle.



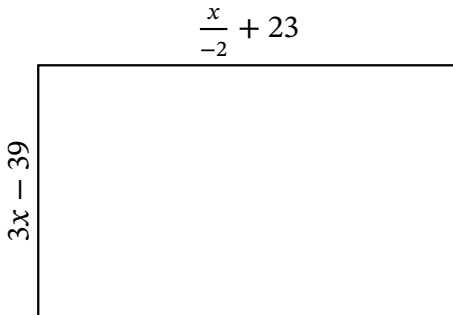
Perimeter: mi
 Value of x : mi
 Length: mi
 Width: mi
 Area: mi²



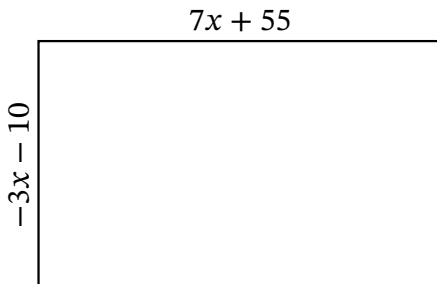
Perimeter: mm
 Value of x : mm
 Length: mm
 Width: mm
 Area: mm²



Perimeter: μm
 Value of x : μm
 Length: μm
 Width: μm
 Area: μm²



Perimeter: yd
 Value of x : yd
 Length: yd
 Width: yd
 Area: yd²



Perimeter: m
 Value of x : m
 Length: m
 Width: m
 Area: m²