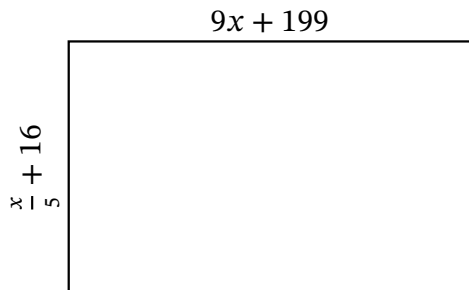


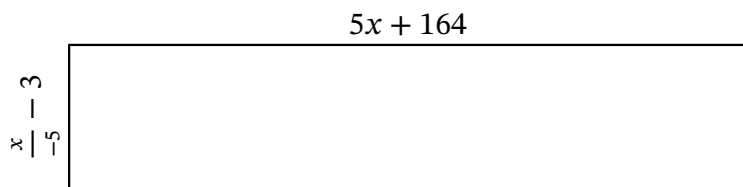
Algebra Rectangles (H)

Name: _____ Date: _____ Score: _____

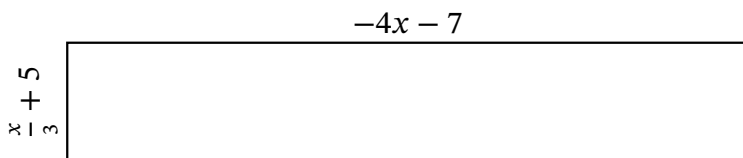
Determine the Value of x , Length, Width and Area for each rectangle.



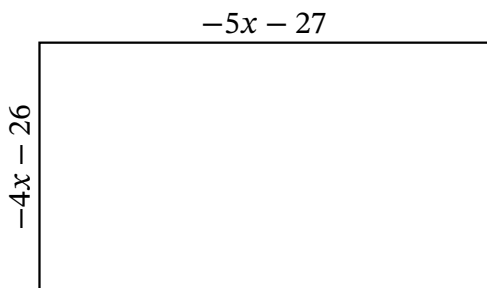
Perimeter: _____ mi
 Value of x : _____ mi
 Length: _____ mi
 Width: _____ mi
 Area: _____ mi^2



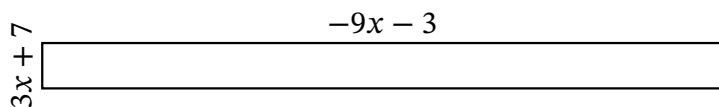
Perimeter: _____ m
 Value of x : _____ m
 Length: _____ m
 Width: _____ m
 Area: _____ m^2



Perimeter: _____ nm
 Value of x : _____ nm
 Length: _____ nm
 Width: _____ nm
 Area: _____ nm^2



Perimeter: _____ yd
 Value of x : _____ yd
 Length: _____ yd
 Width: _____ yd
 Area: _____ yd^2



Perimeter: _____ km
 Value of x : _____ km
 Length: _____ km
 Width: _____ km
 Area: _____ km^2