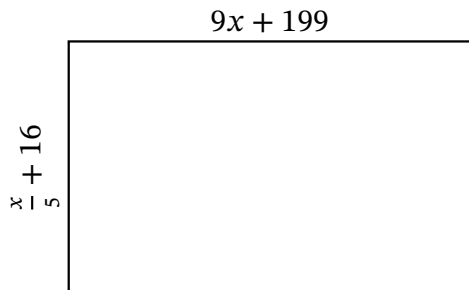


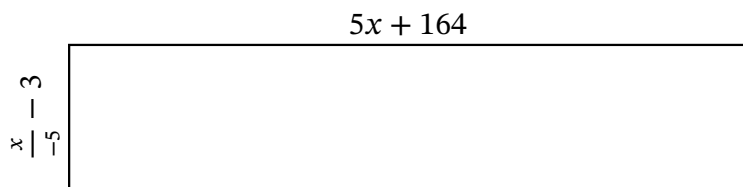
Algebra Rectangles (H)

Name: _____ Date: _____ Score: _____

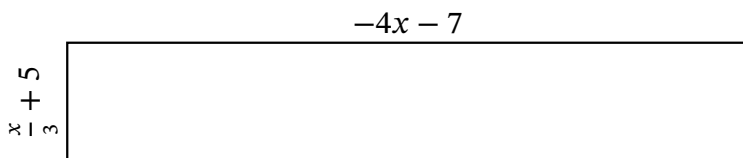
Determine the Value of x , Length, Width and Area for each rectangle.



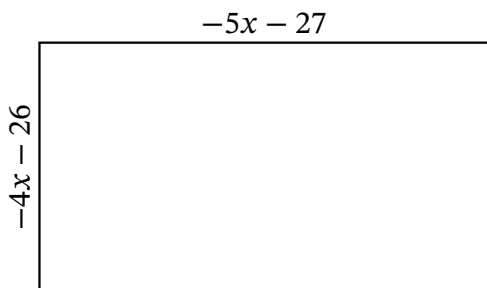
Perimeter: _____ mi
 Value of x : _____ mi
 Length: _____ mi
 Width: _____ mi
 Area: _____ mi²



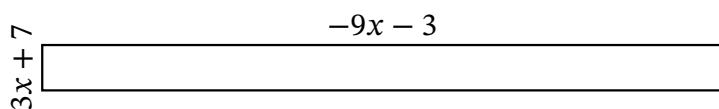
Perimeter: _____ m
 Value of x : _____ m
 Length: _____ m
 Width: _____ m
 Area: _____ m²



Perimeter: _____ nm
 Value of x : _____ nm
 Length: _____ nm
 Width: _____ nm
 Area: _____ nm²



Perimeter: _____ yd
 Value of x : _____ yd
 Length: _____ yd
 Width: _____ yd
 Area: _____ yd²

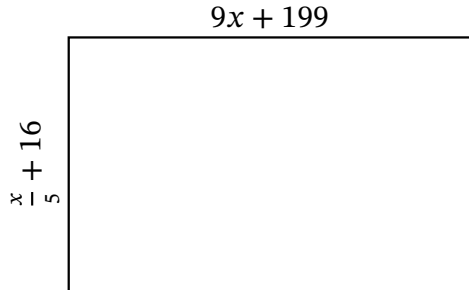


Perimeter: _____ km
 Value of x : _____ km
 Length: _____ km
 Width: _____ km
 Area: _____ km²

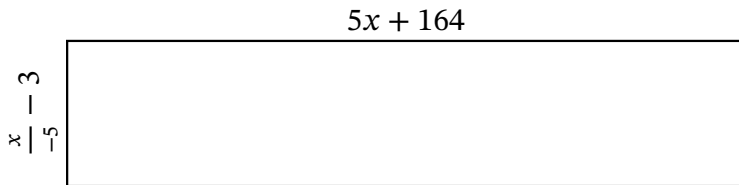
Algebra Rectangles (H) Answers

Name: _____ Date: _____ Score: _____

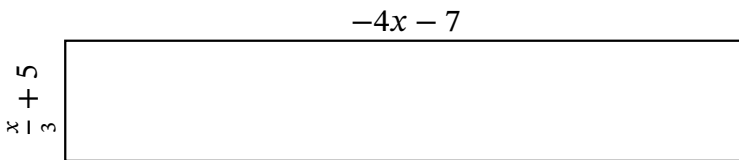
Determine the Value of x , Length, Width and Area for each rectangle.



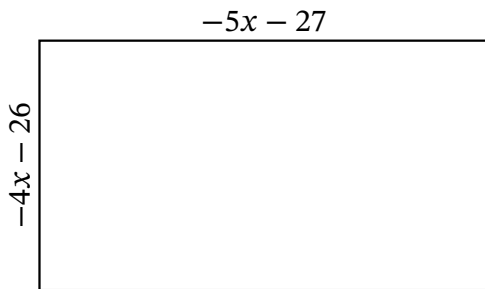
Perimeter: mi
 Value of x : mi
 Length: mi
 Width: mi
 Area: mi^2



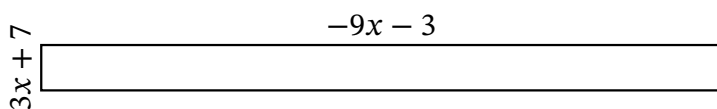
Perimeter: m
 Value of x : m
 Length: m
 Width: m
 Area: m^2



Perimeter: nm
 Value of x : nm
 Length: nm
 Width: nm
 Area: nm^2



Perimeter: yd
 Value of x : yd
 Length: yd
 Width: yd
 Area: yd^2



Perimeter: km
 Value of x : km
 Length: km
 Width: km
 Area: km^2