

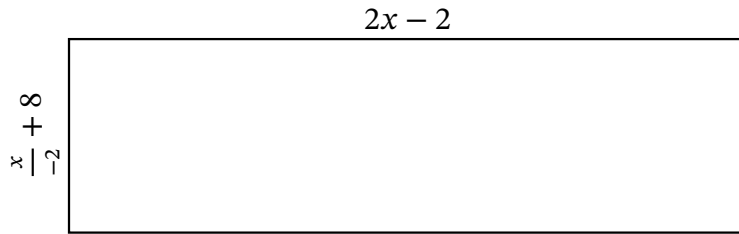
Algebra Rectangles (F)

Name: _____

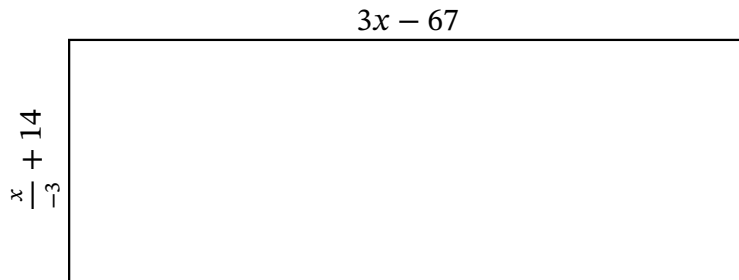
Date: _____

Score: _____

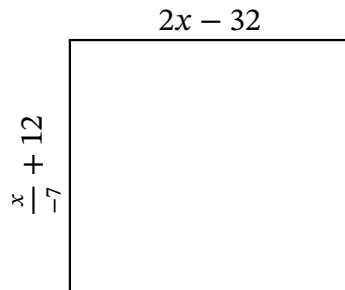
Determine the Value of x , Length, Width and Area for each rectangle.



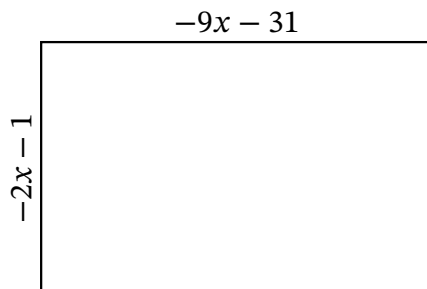
Perimeter: km
 Value of x : km
 Length: km
 Width: km
 Area: km^2



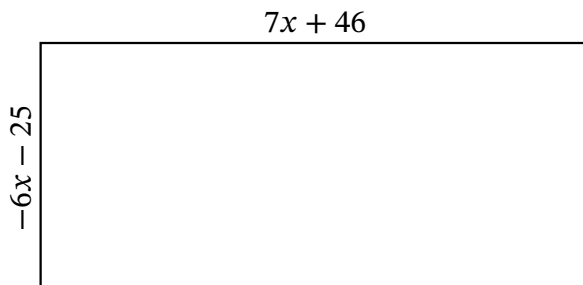
Perimeter: nm
 Value of x : nm
 Length: nm
 Width: nm
 Area: nm^2



Perimeter: ft
 Value of x : ft
 Length: ft
 Width: ft
 Area: ft^2



Perimeter: cm
 Value of x : cm
 Length: cm
 Width: cm
 Area: cm^2



Perimeter: mm
 Value of x : mm
 Length: mm
 Width: mm
 Area: mm^2