

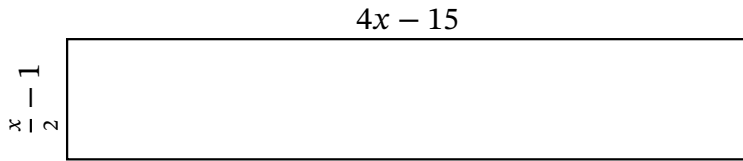
Algebra Rectangles (E)

Name: _____

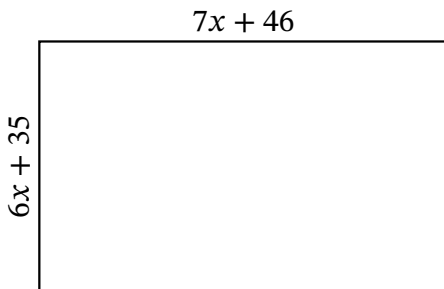
Date: _____

Score: _____

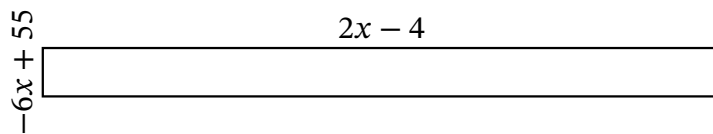
Determine the Value of x , Length, Width and Area for each rectangle.



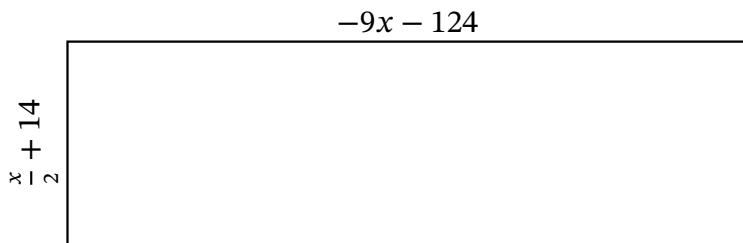
Perimeter: m
 Value of x : m
 Length: m
 Width: m
 Area: m^2



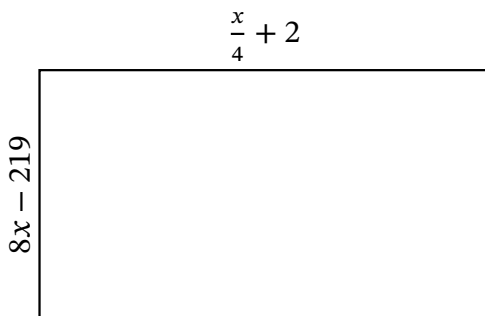
Perimeter: cm
 Value of x : cm
 Length: cm
 Width: cm
 Area: cm^2



Perimeter: yd
 Value of x : yd
 Length: yd
 Width: yd
 Area: yd^2



Perimeter: ft
 Value of x : ft
 Length: ft
 Width: ft
 Area: ft^2



Perimeter: μm
 Value of x : μm
 Length: μm
 Width: μm
 Area: μm^2