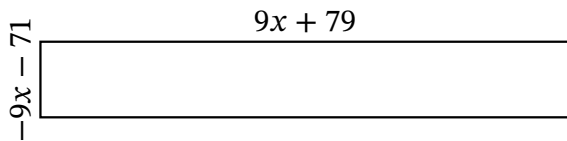


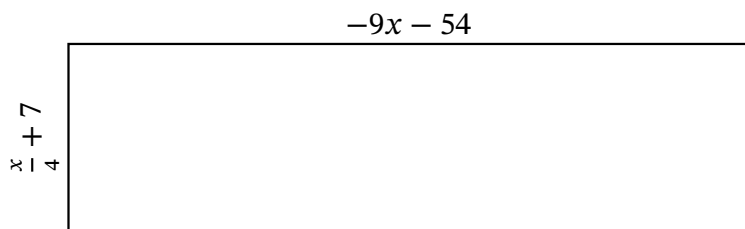
# Algebra Rectangles (D)

Name: \_\_\_\_\_ Date: \_\_\_\_\_ Score: \_\_\_\_\_

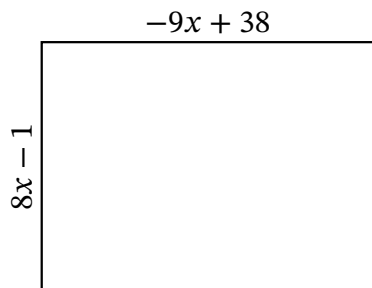
Determine the Value of  $x$ , Length, Width and Area for each rectangle.



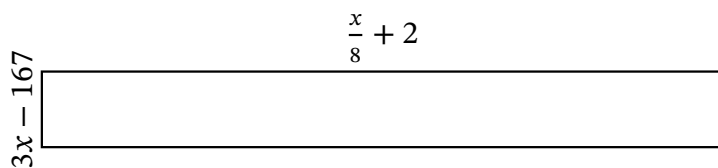
Perimeter: ft  
 Value of  $x$ : ft  
 Length: ft  
 Width: ft  
 Area: ft<sup>2</sup>



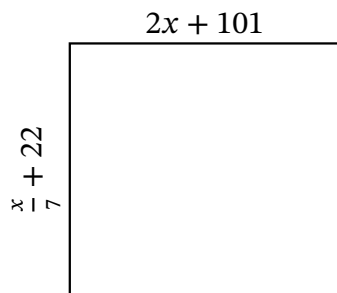
Perimeter: mm  
 Value of  $x$ : mm  
 Length: mm  
 Width: mm  
 Area: mm<sup>2</sup>



Perimeter: in  
 Value of  $x$ : in  
 Length: in  
 Width: in  
 Area: in<sup>2</sup>



Perimeter: mi  
 Value of  $x$ : mi  
 Length: mi  
 Width: mi  
 Area: mi<sup>2</sup>



Perimeter: km  
 Value of  $x$ : km  
 Length: km  
 Width: km  
 Area: km<sup>2</sup>