

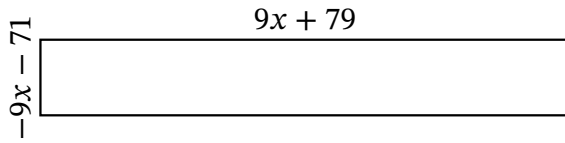
Algebra Rectangles (D)

Name: _____

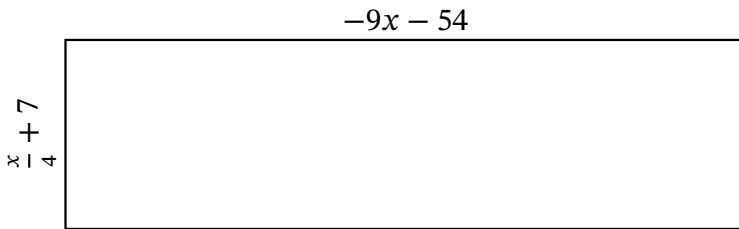
Date: _____

Score: _____

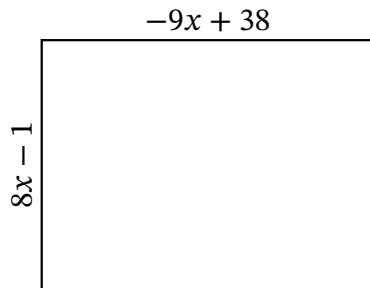
Determine the Value of x , Length, Width and Area for each rectangle.



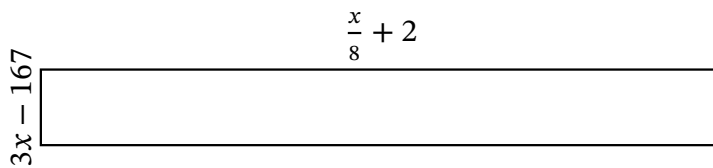
Perimeter: ft
 Value of x : ft
 Length: ft
 Width: ft
 Area: ft^2



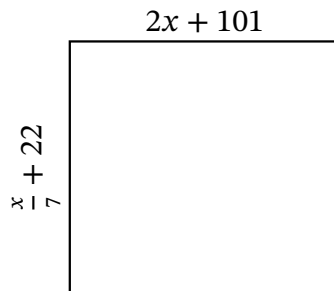
Perimeter: mm
 Value of x : mm
 Length: mm
 Width: mm
 Area: mm^2



Perimeter: in
 Value of x : in
 Length: in
 Width: in
 Area: in^2



Perimeter: mi
 Value of x : mi
 Length: mi
 Width: mi
 Area: mi^2

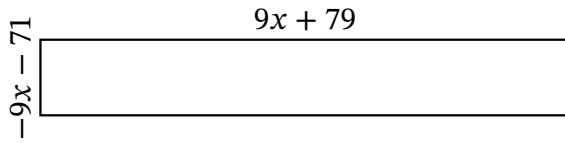


Perimeter: km
 Value of x : km
 Length: km
 Width: km
 Area: km^2

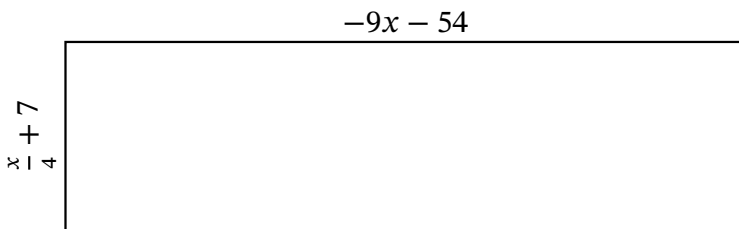
Algebra Rectangles (D) Answers

Name: _____ Date: _____ Score: _____

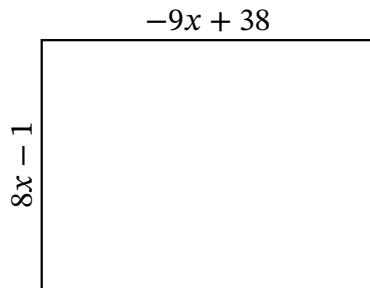
Determine the Value of x , Length, Width and Area for each rectangle.



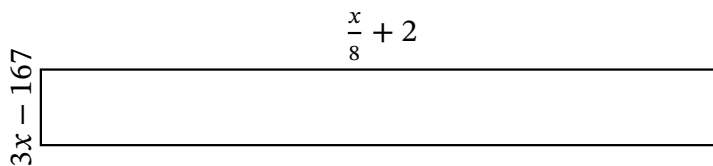
Perimeter: ft
 Value of x : ft
 Length: ft
 Width: ft
 Area: ft²



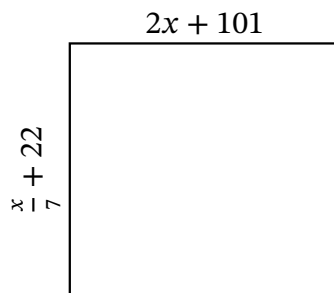
Perimeter: mm
 Value of x : mm
 Length: mm
 Width: mm
 Area: mm²



Perimeter: in
 Value of x : in
 Length: in
 Width: in
 Area: in²



Perimeter: mi
 Value of x : mi
 Length: mi
 Width: mi
 Area: mi²



Perimeter: km
 Value of x : km
 Length: km
 Width: km
 Area: km²