

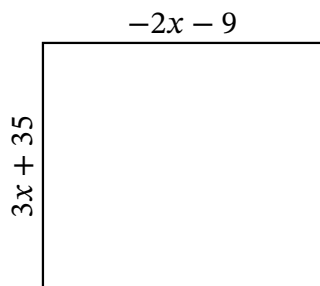
Algebra Rectangles (B)

Name: _____

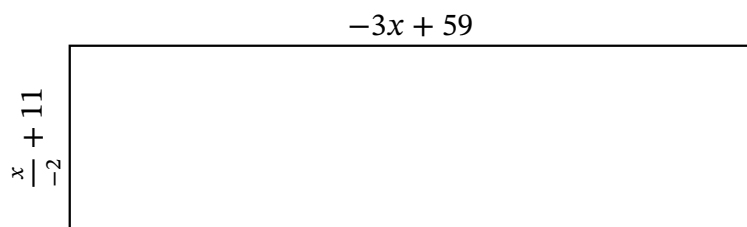
Date: _____

Score: _____

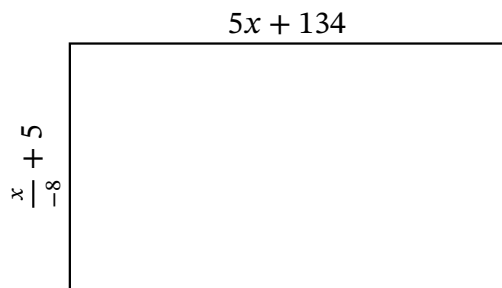
Determine the Value of x , Length, Width and Area for each rectangle.



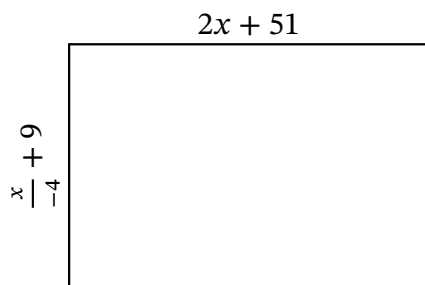
Perimeter: _____ in
 Value of x : _____ in
 Length: _____ in
 Width: _____ in
 Area: _____ in²



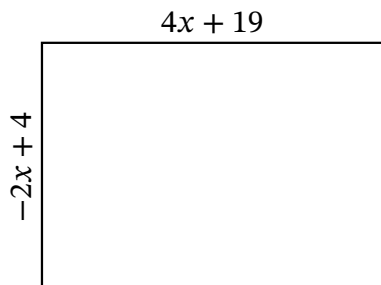
Perimeter: _____ mi
 Value of x : _____ mi
 Length: _____ mi
 Width: _____ mi
 Area: _____ mi²



Perimeter: _____ km
 Value of x : _____ km
 Length: _____ km
 Width: _____ km
 Area: _____ km²



Perimeter: _____ ft
 Value of x : _____ ft
 Length: _____ ft
 Width: _____ ft
 Area: _____ ft²



Perimeter: _____ μm
 Value of x : _____ μm
 Length: _____ μm
 Width: _____ μm
 Area: _____ μm²