

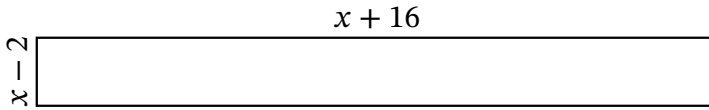
# Algebra Rectangles (J)

Name: \_\_\_\_\_

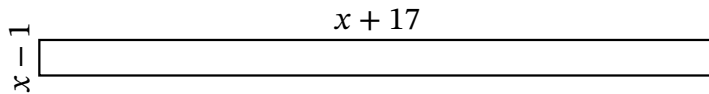
Date: \_\_\_\_\_

Score: \_\_\_\_\_

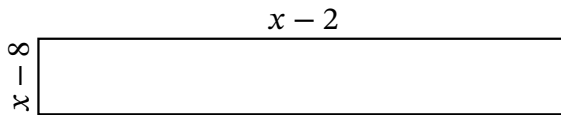
Determine the Value of  $x$ , Length, Width and Area for each rectangle.



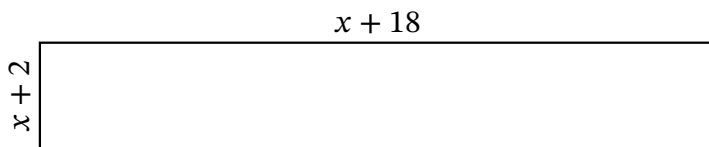
Perimeter: mm  
Value of  $x$ : mm  
Length: mm  
Width: mm  
Area:  $\text{mm}^2$



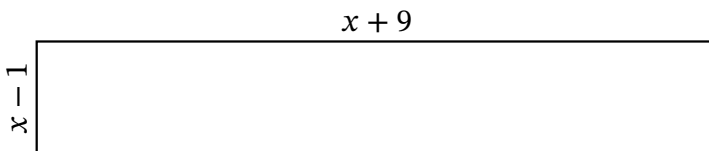
Perimeter: m  
Value of  $x$ : m  
Length: m  
Width: m  
Area:  $\text{m}^2$



Perimeter: cm  
Value of  $x$ : cm  
Length: cm  
Width: cm  
Area:  $\text{cm}^2$



Perimeter: yd  
Value of  $x$ : yd  
Length: yd  
Width: yd  
Area:  $\text{yd}^2$



Perimeter: nm  
Value of  $x$ : nm  
Length: nm  
Width: nm  
Area:  $\text{nm}^2$