

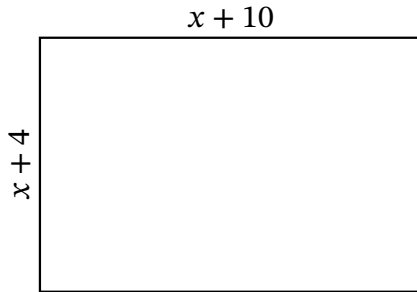
Algebra Rectangles (I)

Name: _____

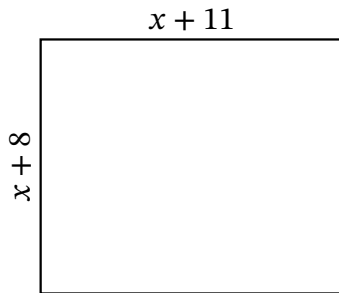
Date: _____

Score: _____

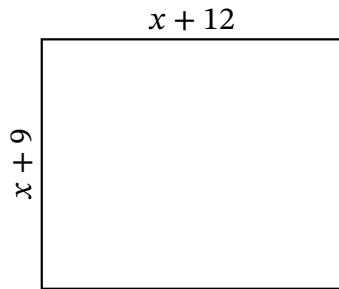
Determine the Value of x , Length, Width and Area for each rectangle.



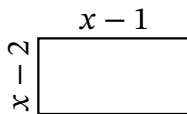
Perimeter: mi
Value of x : mi
Length: mi
Width: mi
Area: mi^2



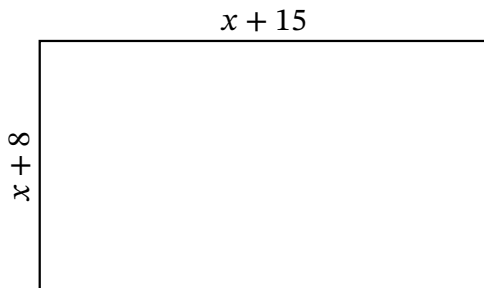
Perimeter: yd
Value of x : yd
Length: yd
Width: yd
Area: yd^2



Perimeter: m
Value of x : m
Length: m
Width: m
Area: m^2



Perimeter: mm
Value of x : mm
Length: mm
Width: mm
Area: mm^2



Perimeter: μm
Value of x : μm
Length: μm
Width: μm
Area: μm^2

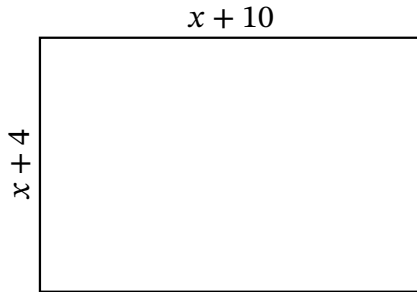
Algebra Rectangles (I) Answers

Name: _____

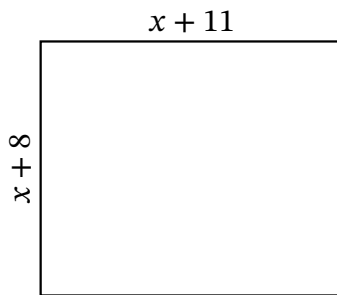
Date: _____

Score: _____

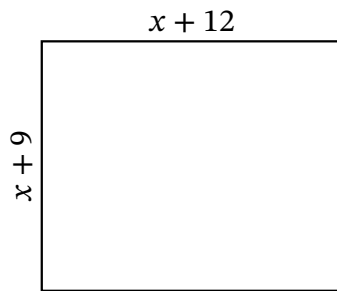
Determine the Value of x , Length, Width and Area for each rectangle.



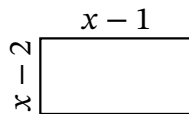
Perimeter: mi
Value of x : mi
Length: mi
Width: mi
Area: mi^2



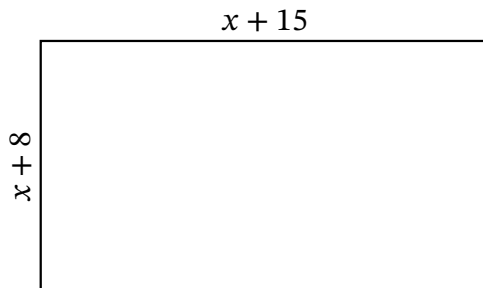
Perimeter: yd
Value of x : yd
Length: yd
Width: yd
Area: yd^2



Perimeter: m
Value of x : m
Length: m
Width: m
Area: m^2



Perimeter: mm
Value of x : mm
Length: mm
Width: mm
Area: mm^2



Perimeter: μm
Value of x : μm
Length: μm
Width: μm
Area: μm^2