

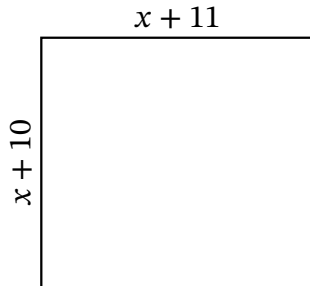
Algebra Rectangles (H)

Name: _____

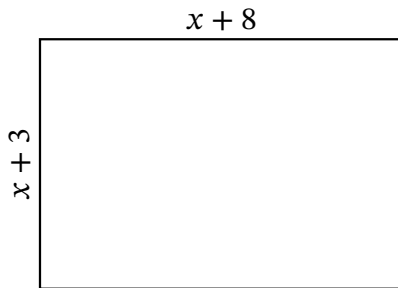
Date: _____

Score: _____

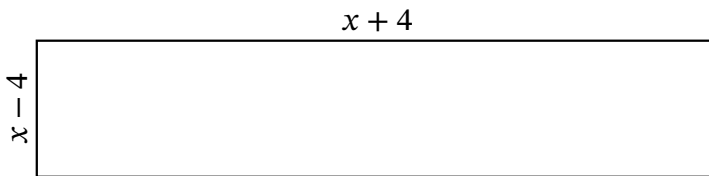
Determine the Value of x , Length, Width and Area for each rectangle.



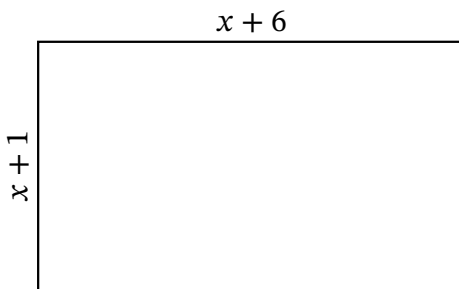
Perimeter: yd
Value of x : yd
Length: yd
Width: yd
Area: yd^2



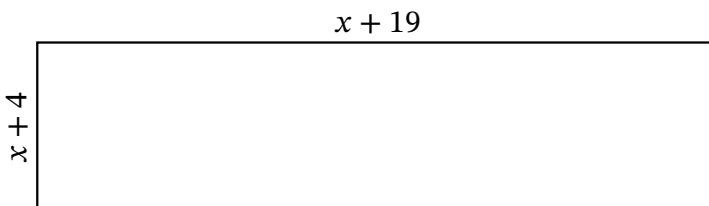
Perimeter: cm
Value of x : cm
Length: cm
Width: cm
Area: cm^2



Perimeter: mi
Value of x : mi
Length: mi
Width: mi
Area: mi^2



Perimeter: ft
Value of x : ft
Length: ft
Width: ft
Area: ft^2



Perimeter: m
Value of x : m
Length: m
Width: m
Area: m^2