

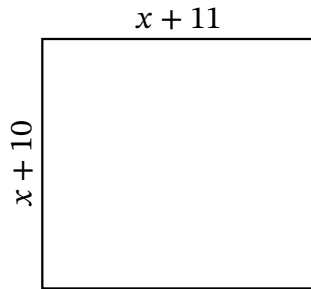
Algebra Rectangles (G)

Name: _____

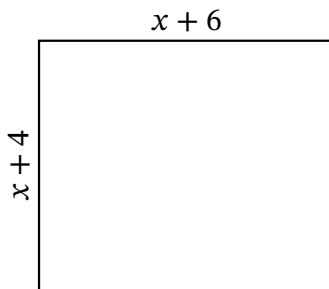
Date: _____

Score: _____

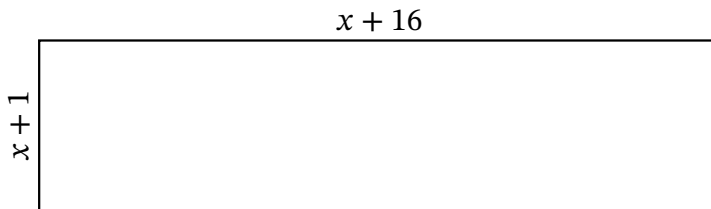
Determine the Value of x , Length, Width and Area for each rectangle.



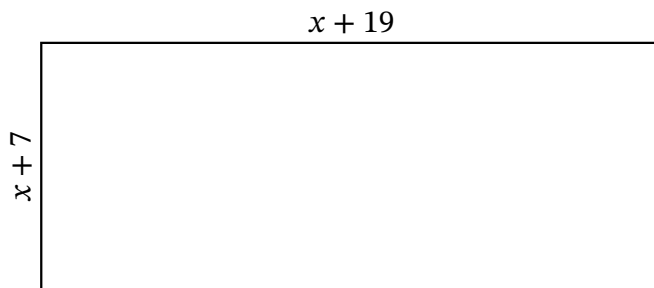
Perimeter: mm
Value of x : mm
Length: mm
Width: mm
Area: mm^2



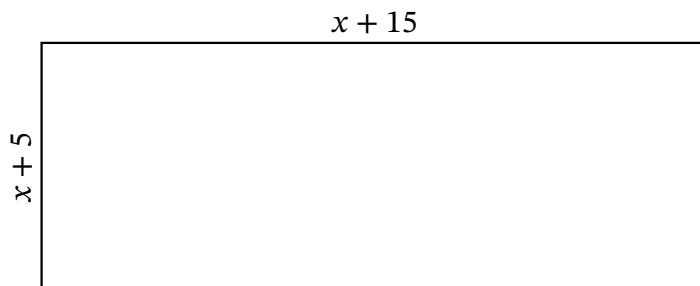
Perimeter: m
Value of x : m
Length: m
Width: m
Area: m^2



Perimeter: cm
Value of x : cm
Length: cm
Width: cm
Area: cm^2



Perimeter: ft
Value of x : ft
Length: ft
Width: ft
Area: ft^2



Perimeter: nm
Value of x : nm
Length: nm
Width: nm
Area: nm^2

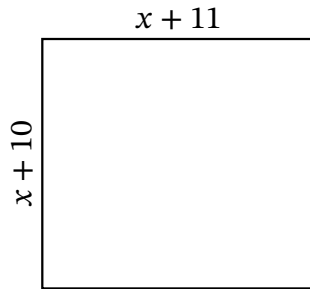
Algebra Rectangles (G) Answers

Name: _____

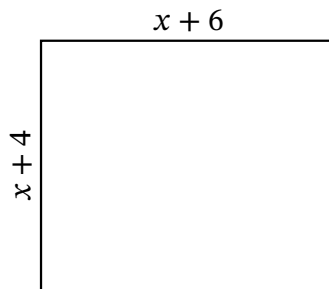
Date: _____

Score: _____

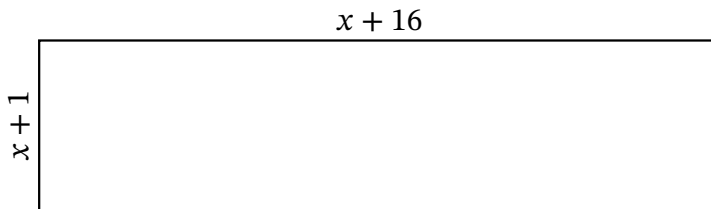
Determine the Value of x , Length, Width and Area for each rectangle.



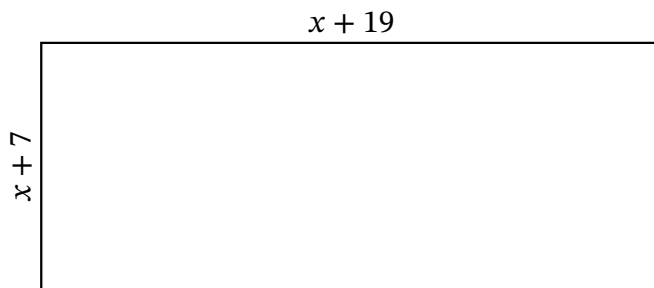
Perimeter: mm
Value of x : mm
Length: mm
Width: mm
Area: mm^2



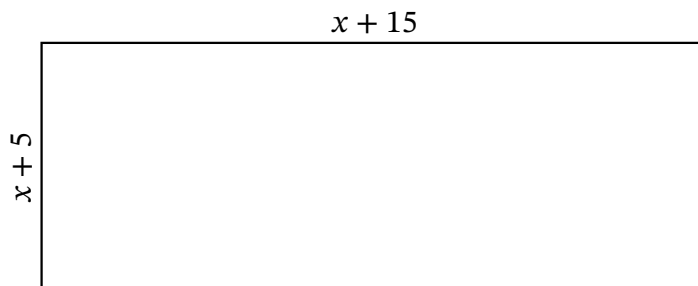
Perimeter: m
Value of x : m
Length: m
Width: m
Area: m^2



Perimeter: cm
Value of x : cm
Length: cm
Width: cm
Area: cm^2



Perimeter: ft
Value of x : ft
Length: ft
Width: ft
Area: ft^2



Perimeter: nm
Value of x : nm
Length: nm
Width: nm
Area: nm^2