

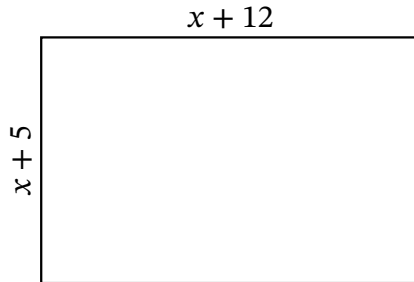
Algebra Rectangles (E)

Name: _____

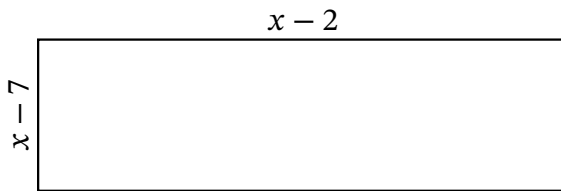
Date: _____

Score: _____

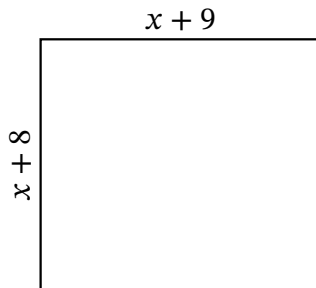
Determine the Value of x , Length, Width and Area for each rectangle.



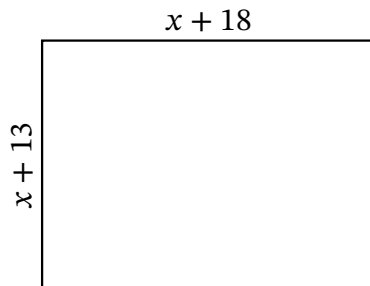
Perimeter: ft
Value of x : ft
Length: ft
Width: ft
Area: ft^2



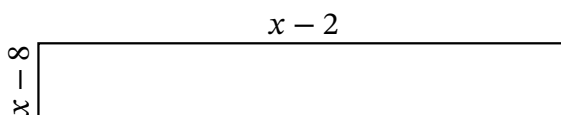
Perimeter: nm
Value of x : nm
Length: nm
Width: nm
Area: nm^2



Perimeter: mi
Value of x : mi
Length: mi
Width: mi
Area: mi^2



Perimeter: μm
Value of x : μm
Length: μm
Width: μm
Area: μm^2



Perimeter: km
Value of x : km
Length: km
Width: km
Area: km^2

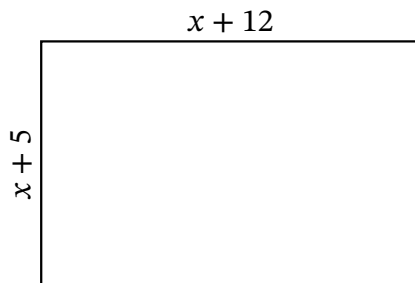
Algebra Rectangles (E) Answers

Name: _____

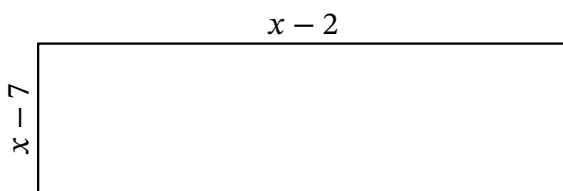
Date: _____

Score: _____

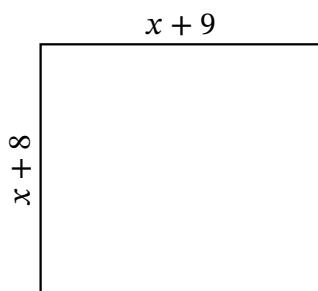
Determine the Value of x , Length, Width and Area for each rectangle.



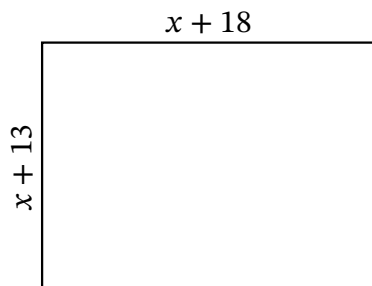
Perimeter: ft
Value of x : ft
Length: ft
Width: ft
Area: ft^2



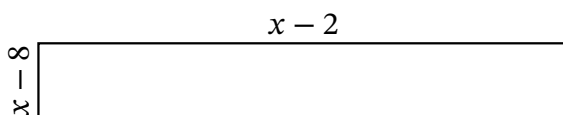
Perimeter: nm
Value of x : nm
Length: nm
Width: nm
Area: nm^2



Perimeter: mi
Value of x : mi
Length: mi
Width: mi
Area: mi^2



Perimeter: μm
Value of x : μm
Length: μm
Width: μm
Area: μm^2



Perimeter: km
Value of x : km
Length: km
Width: km
Area: km^2