

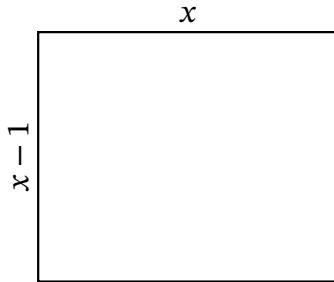
Algebra Rectangles (D)

Name: _____

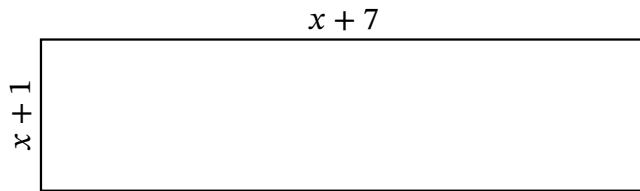
Date: _____

Score: _____

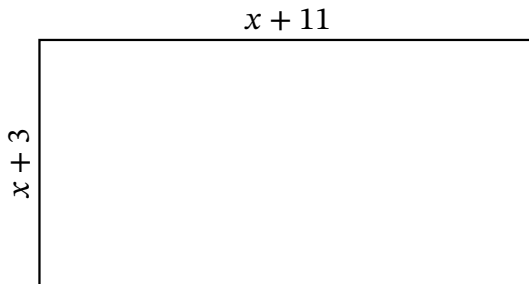
Determine the Value of x , Length, Width and Area for each rectangle.



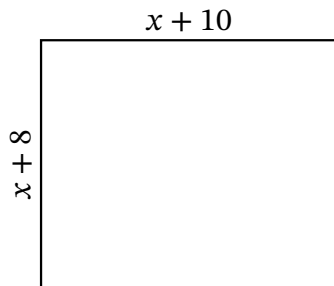
Perimeter: μm
Value of x : μm
Length: μm
Width: μm
Area: μm^2



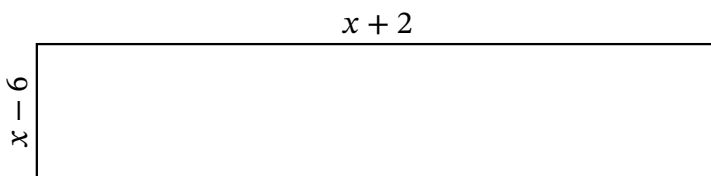
Perimeter: ft
Value of x : ft
Length: ft
Width: ft
Area: ft^2



Perimeter: m
Value of x : m
Length: m
Width: m
Area: m^2



Perimeter: nm
Value of x : nm
Length: nm
Width: nm
Area: nm^2



Perimeter: yd
Value of x : yd
Length: yd
Width: yd
Area: yd^2

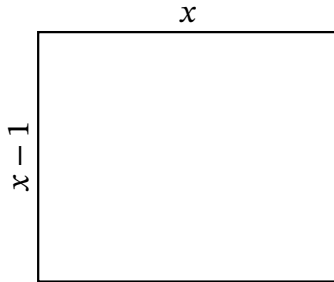
Algebra Rectangles (D) Answers

Name: _____

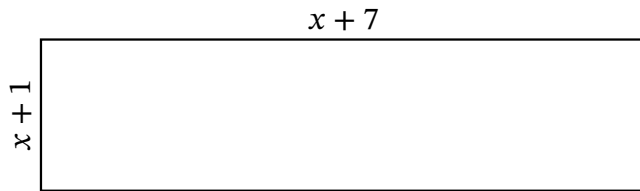
Date: _____

Score: _____

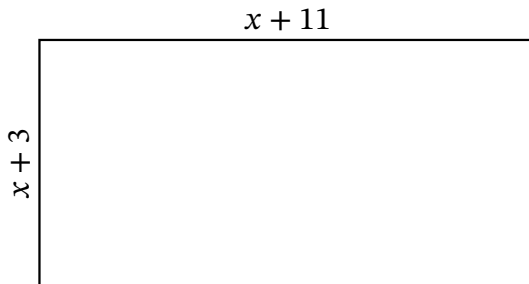
Determine the Value of x , Length, Width and Area for each rectangle.



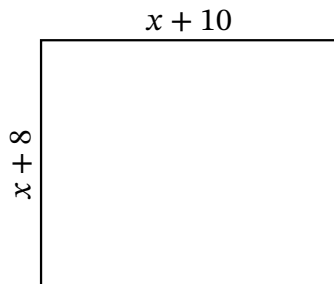
Perimeter: μm
Value of x : μm
Length: μm
Width: μm
Area: μm^2



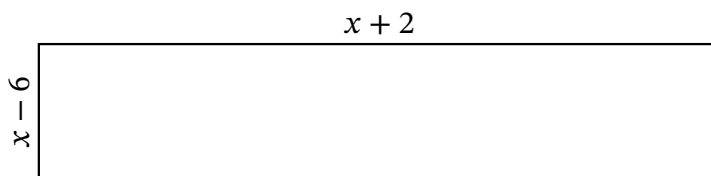
Perimeter: ft
Value of x : ft
Length: ft
Width: ft
Area: ft^2



Perimeter: m
Value of x : m
Length: m
Width: m
Area: m^2



Perimeter: nm
Value of x : nm
Length: nm
Width: nm
Area: nm^2



Perimeter: yd
Value of x : yd
Length: yd
Width: yd
Area: yd^2