

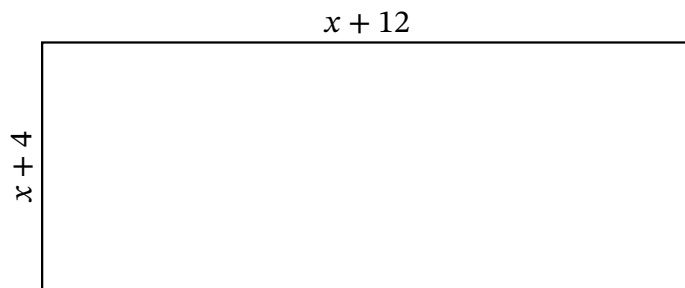
# Algebra Rectangles (B)

Name: \_\_\_\_\_

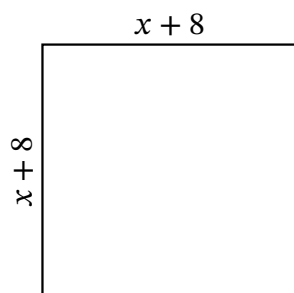
Date: \_\_\_\_\_

Score: \_\_\_\_\_

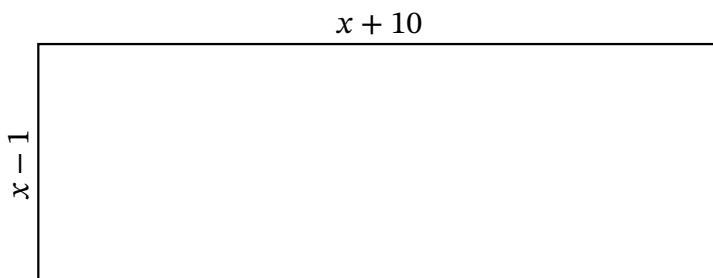
Determine the Value of  $x$ , Length, Width and Area for each rectangle.



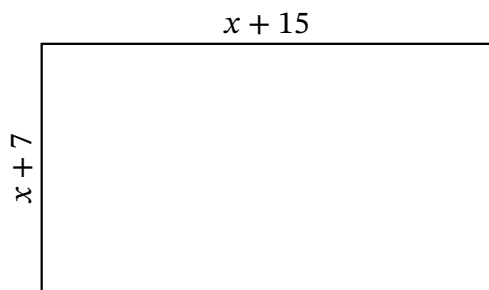
Perimeter: m  
Value of  $x$ : m  
Length: m  
Width: m  
Area:  $m^2$



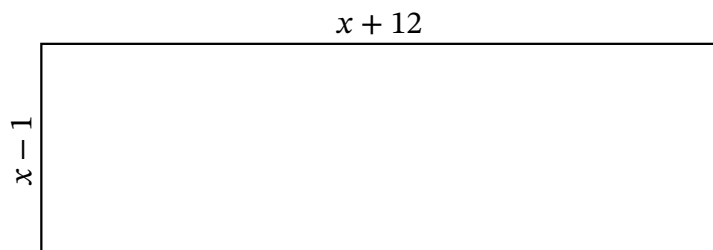
Perimeter: in  
Value of  $x$ : in  
Length: in  
Width: in  
Area:  $in^2$



Perimeter: km  
Value of  $x$ : km  
Length: km  
Width: km  
Area:  $km^2$



Perimeter: ft  
Value of  $x$ : ft  
Length: ft  
Width: ft  
Area:  $ft^2$



Perimeter: mm  
Value of  $x$ : mm  
Length: mm  
Width: mm  
Area:  $mm^2$

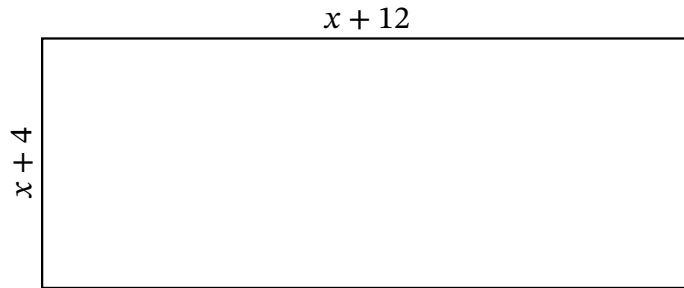
# Algebra Rectangles (B) Answers

Name: \_\_\_\_\_

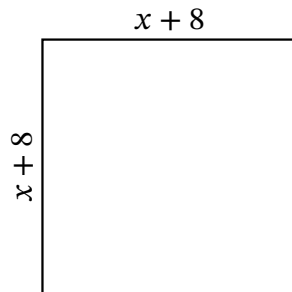
Date: \_\_\_\_\_

Score: \_\_\_\_\_

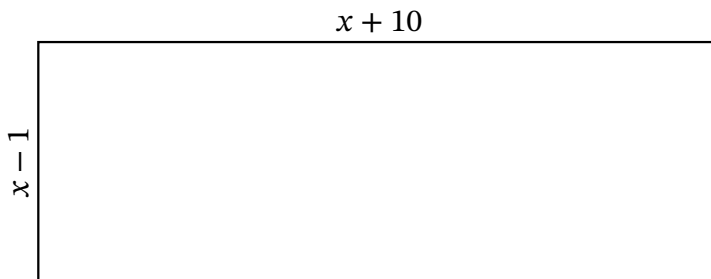
Determine the Value of  $x$ , Length, Width and Area for each rectangle.



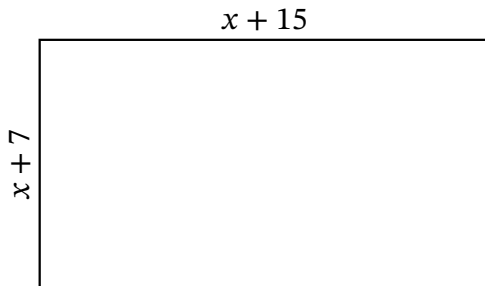
Perimeter: m  
Value of  $x$ : m  
Length: m  
Width: m  
Area:  $m^2$



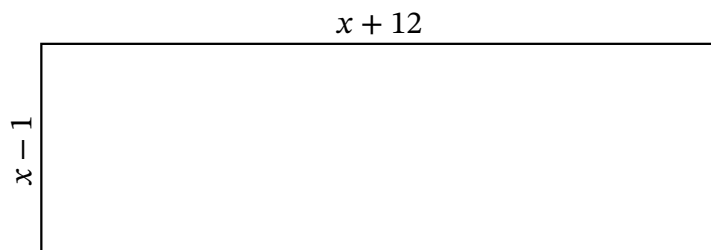
Perimeter: in  
Value of  $x$ : in  
Length: in  
Width: in  
Area:  $in^2$



Perimeter: km  
Value of  $x$ : km  
Length: km  
Width: km  
Area:  $km^2$



Perimeter: ft  
Value of  $x$ : ft  
Length: ft  
Width: ft  
Area:  $ft^2$



Perimeter: mm  
Value of  $x$ : mm  
Length: mm  
Width: mm  
Area:  $mm^2$