




Adding Playing Cards (H)

Find the sum of each set of cards.



Adding Playing Cards (H) Answers

Find the sum of each set of cards.



12



20



21



2



11



15



10



7



6



15



18



22