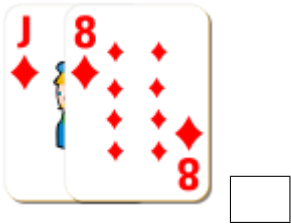


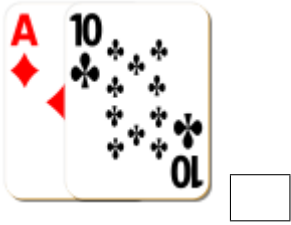


# Adding Playing Cards (D)

Find the sum of each set of cards.



# Adding Playing Cards (D) Answers

Find the sum of each set of cards.



19



18



11



20



15



20



19



21



15



10



22



11