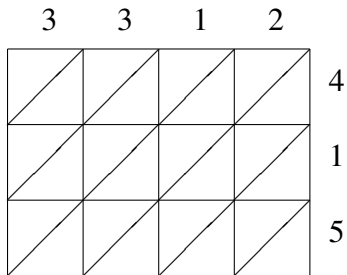
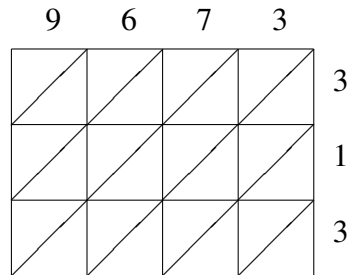


Lattice Multiplication (A)

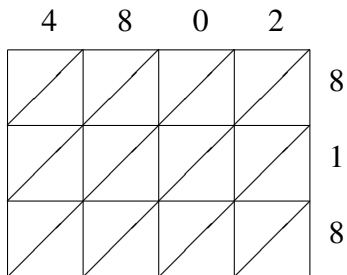
Use lattice multiplication to find each product.



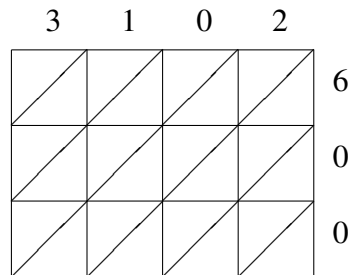
$3312 \times 415 = \underline{\hspace{2cm}}$



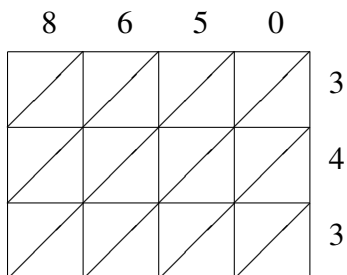
$9673 \times 313 = \underline{\hspace{2cm}}$



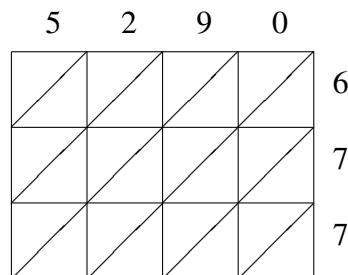
$4802 \times 818 = \underline{\hspace{2cm}}$



$3102 \times 600 = \underline{\hspace{2cm}}$



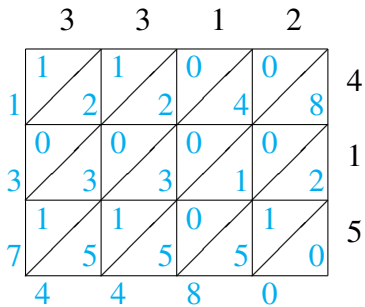
$8650 \times 343 = \underline{\hspace{2cm}}$



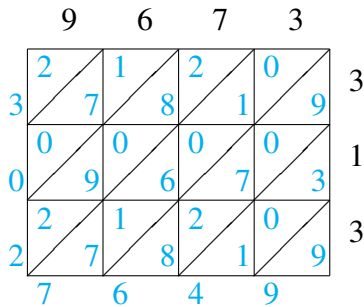
$5290 \times 677 = \underline{\hspace{2cm}}$

Lattice Multiplication (A) Answers

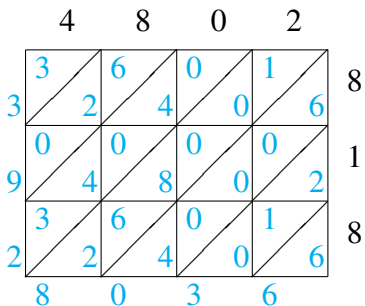
Use lattice multiplication to find each product.



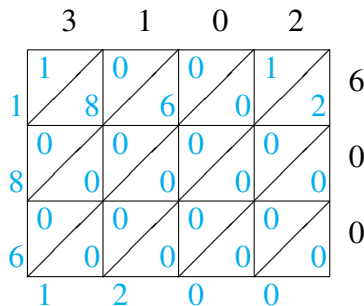
$$3312 \times 415 = 1,374,480$$



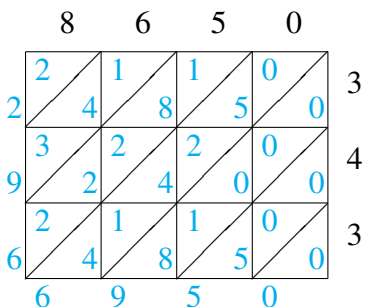
$$9673 \times 313 = 3,027,649$$



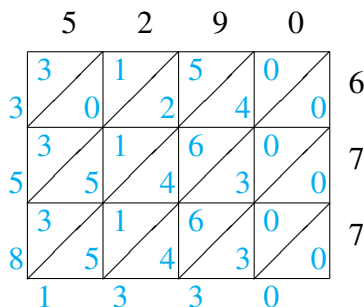
$$4802 \times 818 = 3,928,036$$



$$3102 \times 600 = 1,861,200$$



$$8650 \times 343 = 2,966,950$$



$$5290 \times 677 = 3,581,330$$