


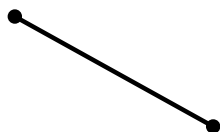


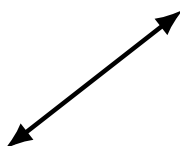
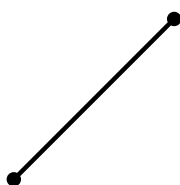
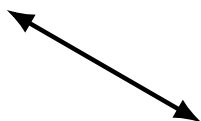
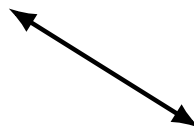

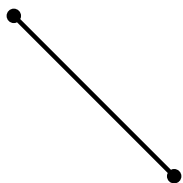
Lines, Line Segments and Rays (A)

Name: _____

Date: _____

Score: _____

Identify each diagram as representing a line, line segment or a ray.



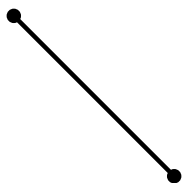
Lines, Line Segments and Rays (A) Answers

Name: _____


Date: _____

Score: _____

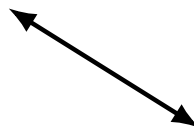
Identify each diagram as representing a line, line segment or a ray.



line segment



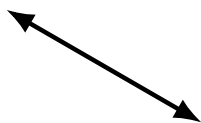
ray



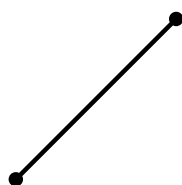
line



line segment



line



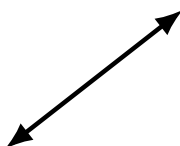
line segment



line segment



line



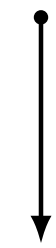
line



line segment



ray



ray




line



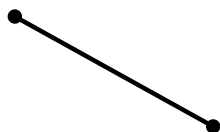
line



ray



ray



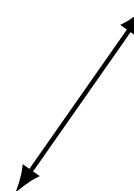
line segment



ray



ray



line