

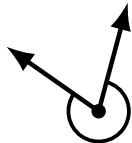
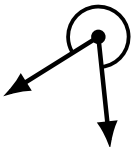
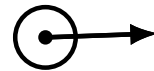
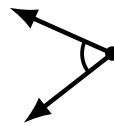
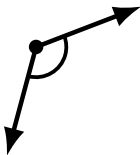
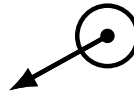
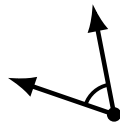
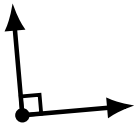
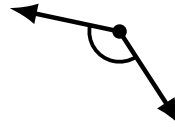

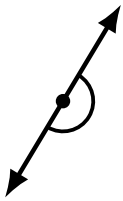
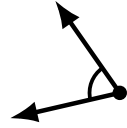
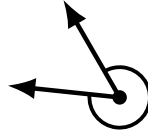
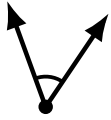
Identifying Angle Types (A)

Name: _____

Date: _____

Score: _____

Identify each angle as acute, obtuse, right, straight, reflex or complete/full.



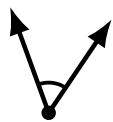
Identifying Angle Types (A) Answers

Name: _____

Date: _____

Score: _____

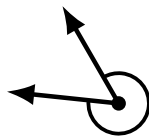
Identify each angle as acute, obtuse, right, straight, reflex or complete/full.



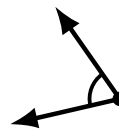
acute



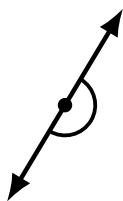
reflex



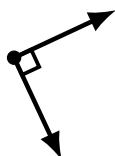
reflex



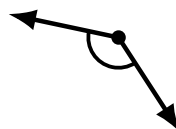
acute



straight



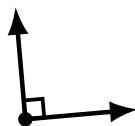
right



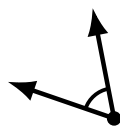
obtuse



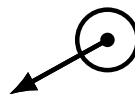
obtuse



right



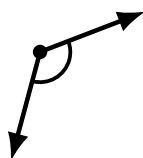
acute



complete/full



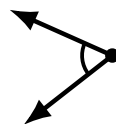
straight



obtuse



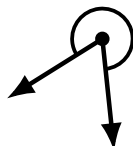
obtuse



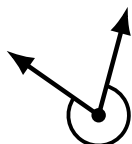
acute



complete/full



reflex



reflex



obtuse



acute