

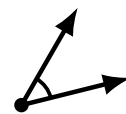
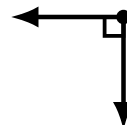
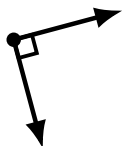
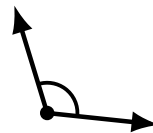
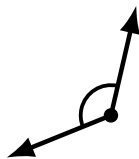
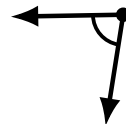
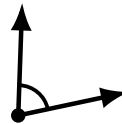
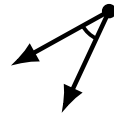
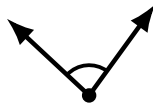
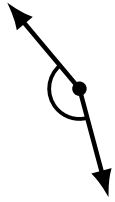
# Identifying Angle Types (A)

Name: \_\_\_\_\_

Date: \_\_\_\_\_

Score: \_\_\_\_\_

Identify each angle as acute, obtuse, right or straight.



# Identifying Angle Types (A) Answers

Name: \_\_\_\_\_

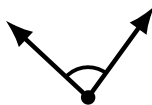
Date: \_\_\_\_\_

Score: \_\_\_\_\_

Identify each angle as acute, obtuse, right or straight.



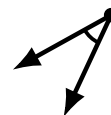
obtuse



acute



straight



acute



straight



obtuse



obtuse



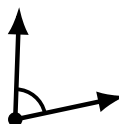
obtuse



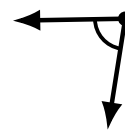
acute



obtuse



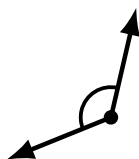
acute



acute



acute



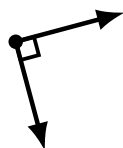
obtuse



obtuse



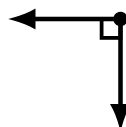
acute



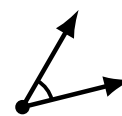
right



obtuse



right



acute