

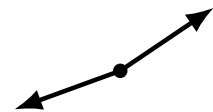
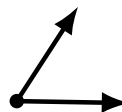
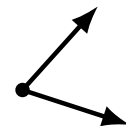
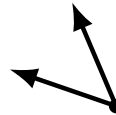
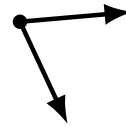
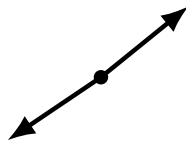
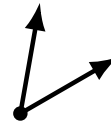
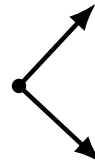

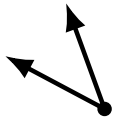
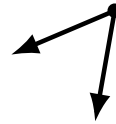
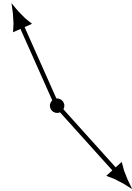
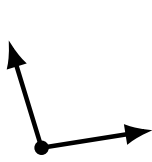
Identifying Angle Types (A)

Name: _____

Date: _____

Score: _____

Identify each angle as acute, obtuse or right.



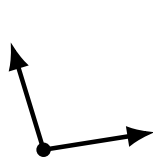
Identifying Angle Types (A) Answers

Name: _____

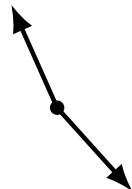
Date: _____

Score: _____

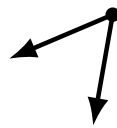
Identify each angle as acute, obtuse or right.



obtuse



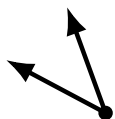
obtuse



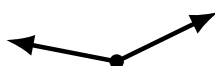
acute



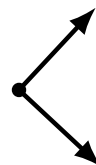
acute



acute



obtuse



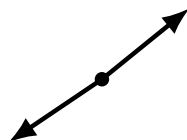
right



acute



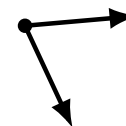
right



obtuse



acute



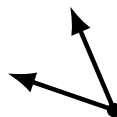
acute



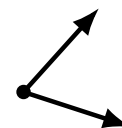
obtuse



obtuse



acute



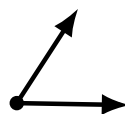
acute



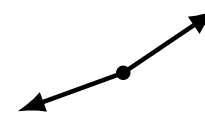
obtuse



obtuse



acute



obtuse