

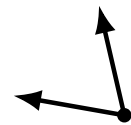
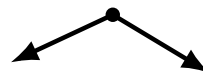
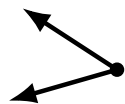
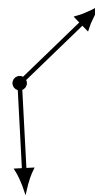
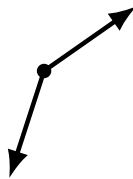
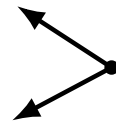
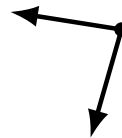
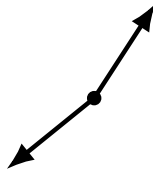
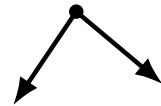

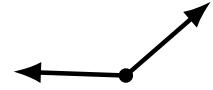
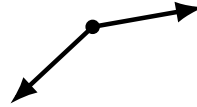
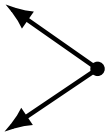
# Identifying Angle Types (A)

Name: \_\_\_\_\_

Date: \_\_\_\_\_

Score: \_\_\_\_\_

Identify each angle as acute or obtuse.



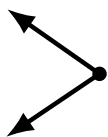
# Identifying Angle Types (A) Answers

Name: \_\_\_\_\_

Date: \_\_\_\_\_

Score: \_\_\_\_\_

Identify each angle as acute or obtuse.



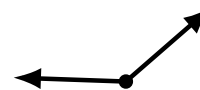
acute



obtuse



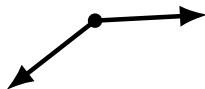
obtuse



obtuse



obtuse



obtuse



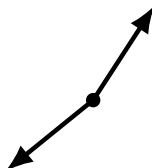
obtuse



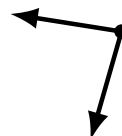
acute



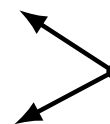
acute



obtuse



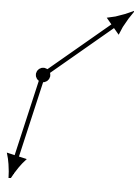
acute



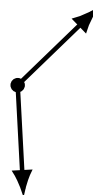
acute



acute



obtuse



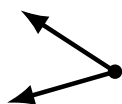
obtuse



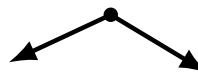
acute



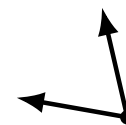
acute



acute



obtuse



acute