

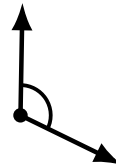
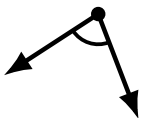

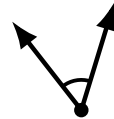
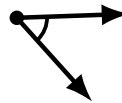
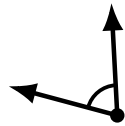
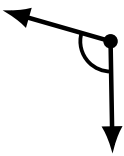
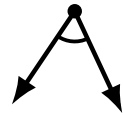
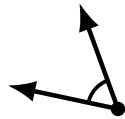
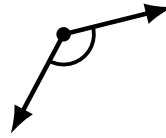

Identifying Angle Types (A)

Name: _____

Date: _____

Score: _____

Identify each angle as acute or obtuse.



Identifying Angle Types (A) Answers

Name: _____

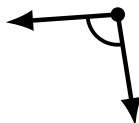
Date: _____

Score: _____

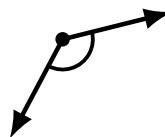
Identify each angle as acute or obtuse.



acute



obtuse



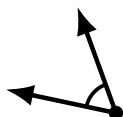
obtuse



obtuse



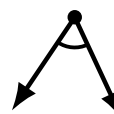
acute



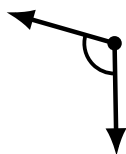
acute



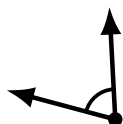
acute



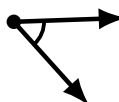
acute



obtuse



acute



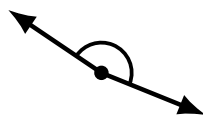
acute



obtuse




obtuse



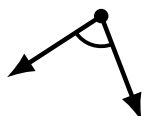
obtuse



acute



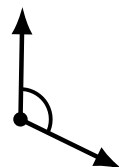
acute



acute



obtuse



obtuse



obtuse