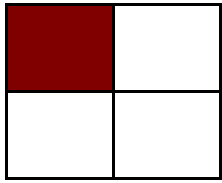



# Modeling Fourths (E)

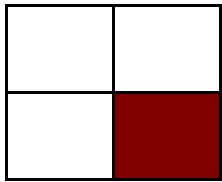
Instructions: Write the correct numerator.



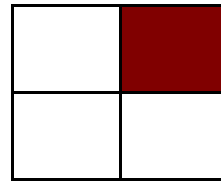
$$\frac{1}{4}$$



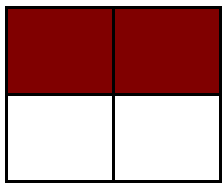
$$\frac{4}{4}$$



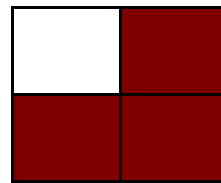
$$\frac{1}{4}$$



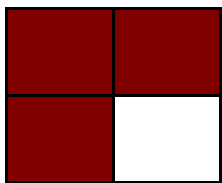
$$\frac{1}{4}$$



$$\frac{2}{4}$$



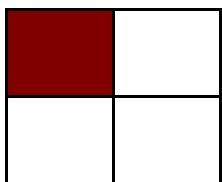
$$\frac{2}{4}$$




$$\frac{3}{4}$$




$$\frac{1}{4}$$



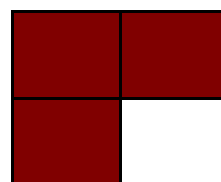
$$\frac{1}{4}$$



$$\frac{2}{4}$$



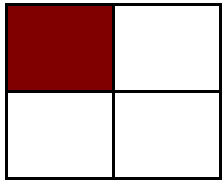
$$\frac{1}{4}$$




$$\frac{3}{4}$$

# Modeling Fourths (E) Answers

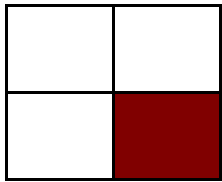
Instructions: Write the correct numerator.



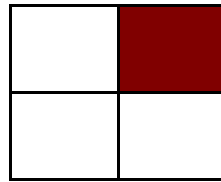
$$\frac{1}{4}$$



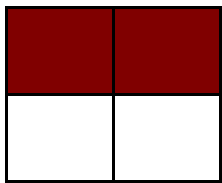
$$\frac{3}{4}$$




$$\frac{1}{4}$$



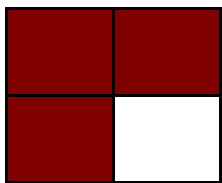
$$\frac{1}{4}$$




$$\frac{2}{4}$$



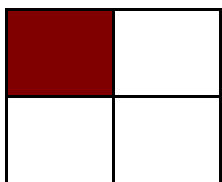
$$\frac{3}{4}$$




$$\frac{3}{4}$$




$$\frac{1}{4}$$



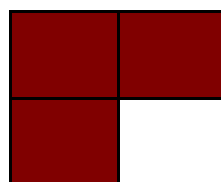
$$\frac{1}{4}$$



$$\frac{2}{4}$$



$$\frac{1}{4}$$



$$\frac{3}{4}$$